

Please write clearly in block capitals.

Centre number

--	--	--	--	--

Candidate number

--	--	--	--

Surname

Forename(s)

Candidate signature

GCSE MATHEMATICS

H

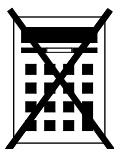
Higher Tier Paper 1 Non-Calculator

Thursday 2 November 2017 Morning Time allowed: 1 hour 30 minutes

Materials

For this paper you must have:

- mathematical instruments



You must **not** use a calculator.

Instructions

- Use black ink or black ball-point pen. Draw diagrams in pencil.
- Answer **all** questions.
- You must answer the questions in the spaces provided. Do not write outside the box around each page or on blank pages.
- Do all rough work in this book. Cross through any work you do not want to be marked.

Information

- The marks for questions are shown in brackets.
- The maximum mark for this paper is 80.
- You may ask for more answer paper, graph paper and tracing paper. These must be tagged securely to this answer book.

For Examiner's Use

Pages	Mark
2–3	
4–5	
6–7	
8–9	
10–11	
12–13	
14–15	
16–17	
18–19	
20–21	
22–23	
24–25	
26–27	
TOTAL	

Advice

- In all calculations, show clearly how you work out your answer.



Answer **all** questions in the spaces provided

- 1 Work out $\sqrt{2^6 + 6^2}$
Circle your answer.

[1 mark]

10

14

50

100

- 2 What is 800 million in standard form?
Circle your answer.

[1 mark]

800×10^6

8×10^8

8×10^9

0.8×10^{10}

- 3 Circle the expression that is equivalent to $(4a^5)^2$

[1 mark]

$16a^{10}$

$16a^7$

$8a^{10}$

$8a^7$



4 $y = \frac{10}{x}$

If the value of x doubles, what happens to the value of y ?

Circle your answer.

[1 mark]

$\div 2$

$\times 2$

$\div 5$

$\times 5$

5 (a) Factorise $x^2 - 100$

[1 mark]

Answer _____

5 (b) Solve $7x + 6 > 1 + 2x$

[2 marks]

Answer _____

7

Turn over ►

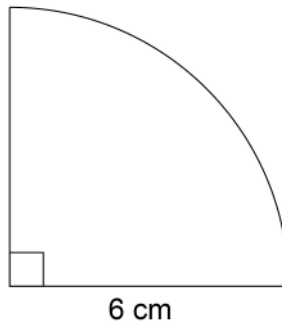


6 Work out the value of $(\sqrt{3})^2 \times (\sqrt{2})^2$

[2 marks]

Answer _____

7 Here is a quarter circle of radius 6 cm



Not drawn
accurately

Work out the area of the quarter circle.

Give your answer in terms of π .

[2 marks]

Answer _____ cm^2



8 Three **whole** numbers are each rounded to the nearest 10

The sum of the rounded numbers is 70

Work out the **maximum** possible sum for the original three numbers.

[2 marks]

Answer _____

9 Circle the expression for the range of n consecutive integers.

[1 mark]

$$\frac{n+1}{2}$$

$$n-1$$

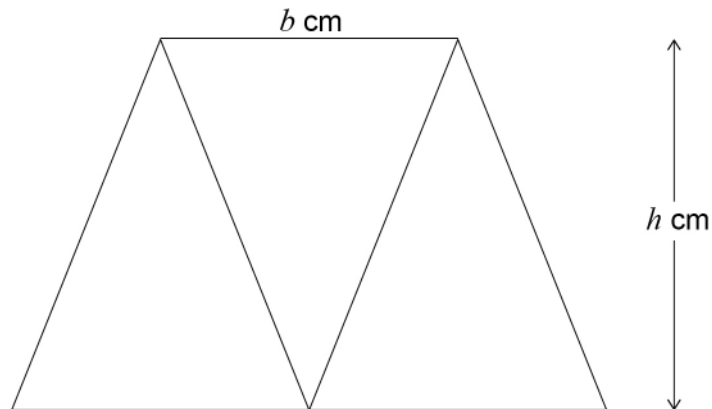
$$n$$

$$n+1$$

Turn over for the next question



- 10** Three identical isosceles triangles are joined to make this trapezium.
Each triangle has base b cm and perpendicular height h cm



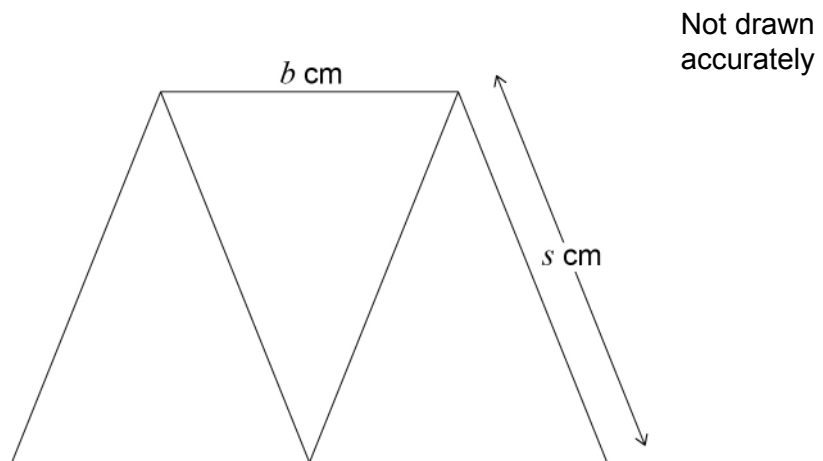
- 10 (a)** Work out an expression, in terms of b and h , for the area of the trapezium.
Give your answer in its simplest form.

[2 marks]

Answer _____ cm^2



10 (b) This diagram shows the same trapezium.



$$b : s = 2 : 3$$

Work out an expression, in terms of b , for the perimeter of the trapezium.

[2 marks]

Answer _____ cm

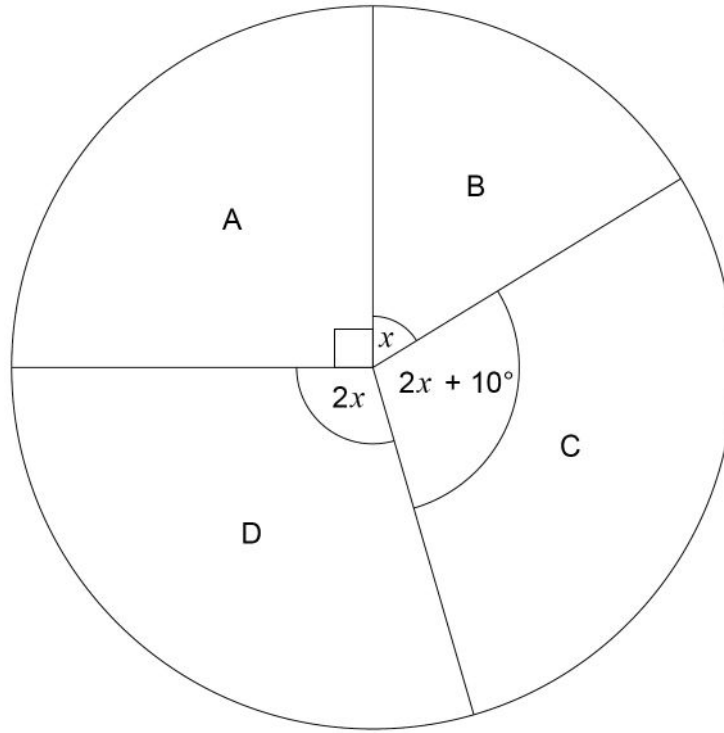
Turn over for the next question



- 11** The four candidates in an election were A, B, C and D.
The pie chart shows the proportion of votes for each candidate.

Proportion of votes

Not drawn
accurately



Work out the probability that a person who voted, chosen at random, voted for C.

[4 marks]

Answer _____



12 Use approximations to 1 significant figure to estimate the value of

$$\frac{0.526 \times 39.6^2}{\sqrt{97.65}}$$

You **must** show your working.

[3 marks]

Answer _____

Turn over for the next question

7

Turn over ►



13

$$x : y = 7 : 4$$

$$x + y = 88$$

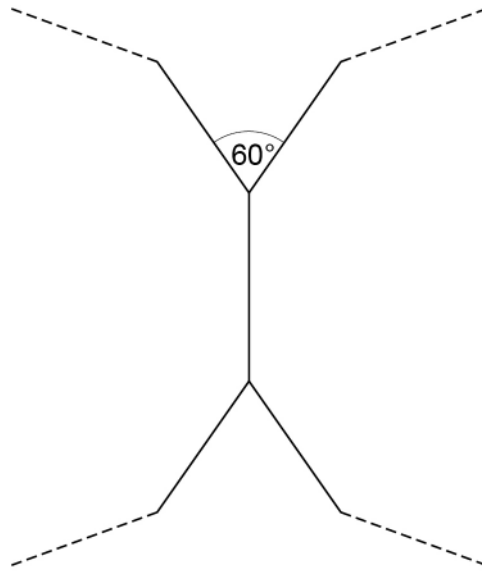
Work out the value of $x - y$

[3 marks]

Answer _____



- 14** Two congruent regular polygons are joined together.



Not drawn
accurately

Work out the number of sides on each polygon.

[3 marks]

Answer _____

Turn over for the next question



15

Meal Deal

Choose one sandwich, one drink and one snack

There are

7 different sandwiches

5 different drinks

and

3 different snacks.

15 (a) How many different Meal Deal combinations are there?**[2 marks]**

Answer _____

15 (b) Two of the sandwiches have cheese in them.

Three of the drinks are fizzy.

Eva picks a Meal Deal at random.

Work out the probability that the sandwich has cheese in it **and** the drink is fizzy.

Give your answer as a fraction.

[2 marks]

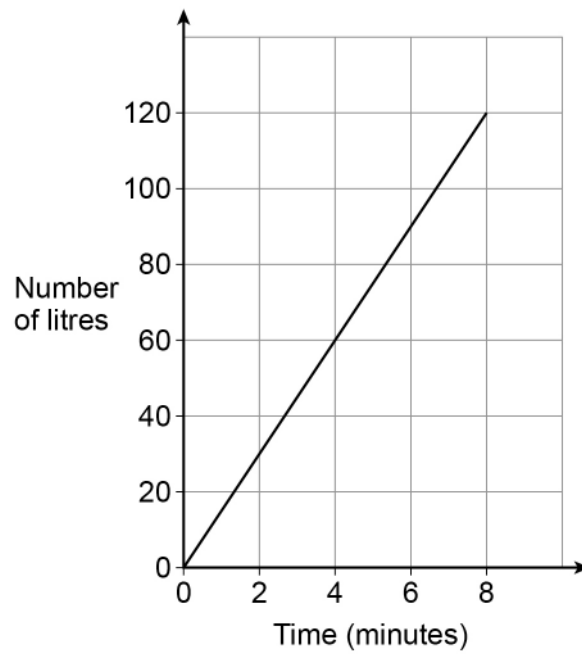
Answer _____



16

Water is poured into a tank.

The graph shows the number of litres of water in the tank.



How much water is poured into the tank each minute?

Circle your answer.

[1 mark]

1.5 litres

15 litres

30 litres

120 litres

Turn over for the next question

Turn over ►



- 17 A and B are **similar** solids.

Solid	length (cm)
A	l
B	$2l$

Alex says,

“The volume of B is double the volume of A
because the length of B is double the length of A.”

Is he correct?

Tick a box.

Yes

No

Give a reason for your answer.

[1 mark]

- 18 Circle the **two** roots of $(2x + 3)(5x - 2) = 0$

[1 mark]

$$-\frac{3}{2}$$

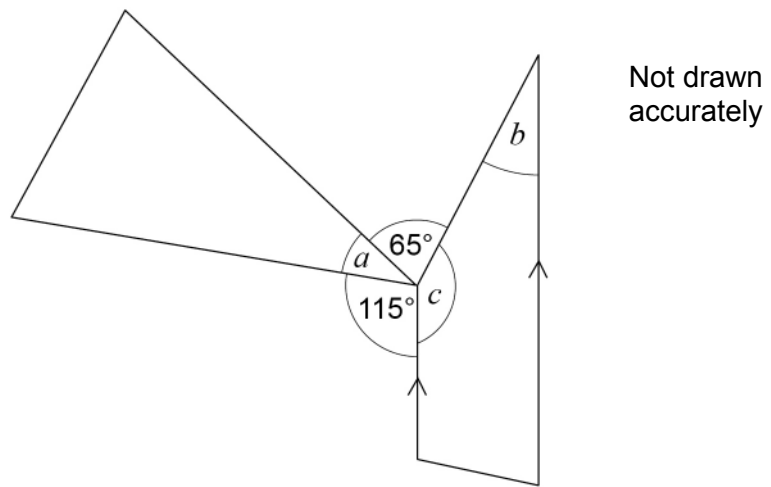
$$-\frac{2}{5}$$

$$\frac{2}{5}$$

$$\frac{3}{2}$$



- 19 The diagram shows a triangle and a trapezium.



Prove that $a = b$

[3 marks]

Turn over for the next question



20

In one month, the number of hours of exercise taken by 10 people are

4 7 2 8 6 5 1 82 3 9

Which is the appropriate average to use in this situation?

Tick a box.

Mean

Median

Mode

Give one reason for each of the other two averages as to why they are **not** appropriate.

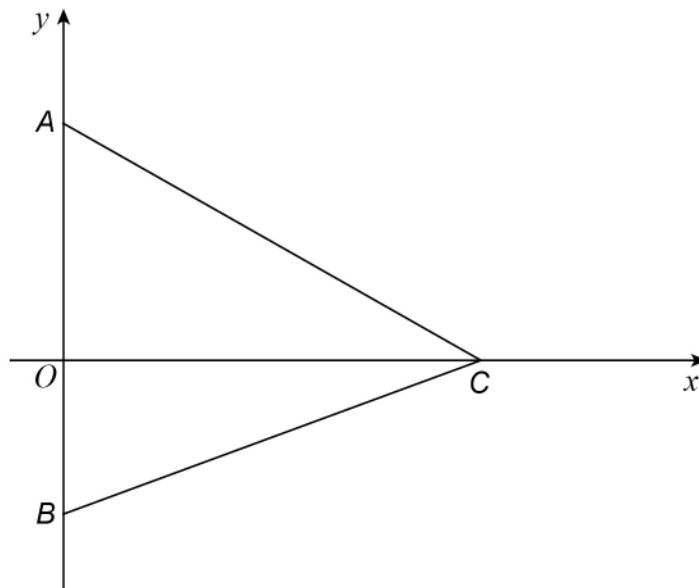
[2 marks]

Reason 1 _____

Reason 2 _____



21 A , B and C are points on the axes as shown.



Not drawn
accurately

The area of triangle ABC is 28 square units.

Work out possible coordinates for A , B and C .

[2 marks]

A (_____ , _____) B (_____ , _____) C (_____ , _____)

Turn over for the next question

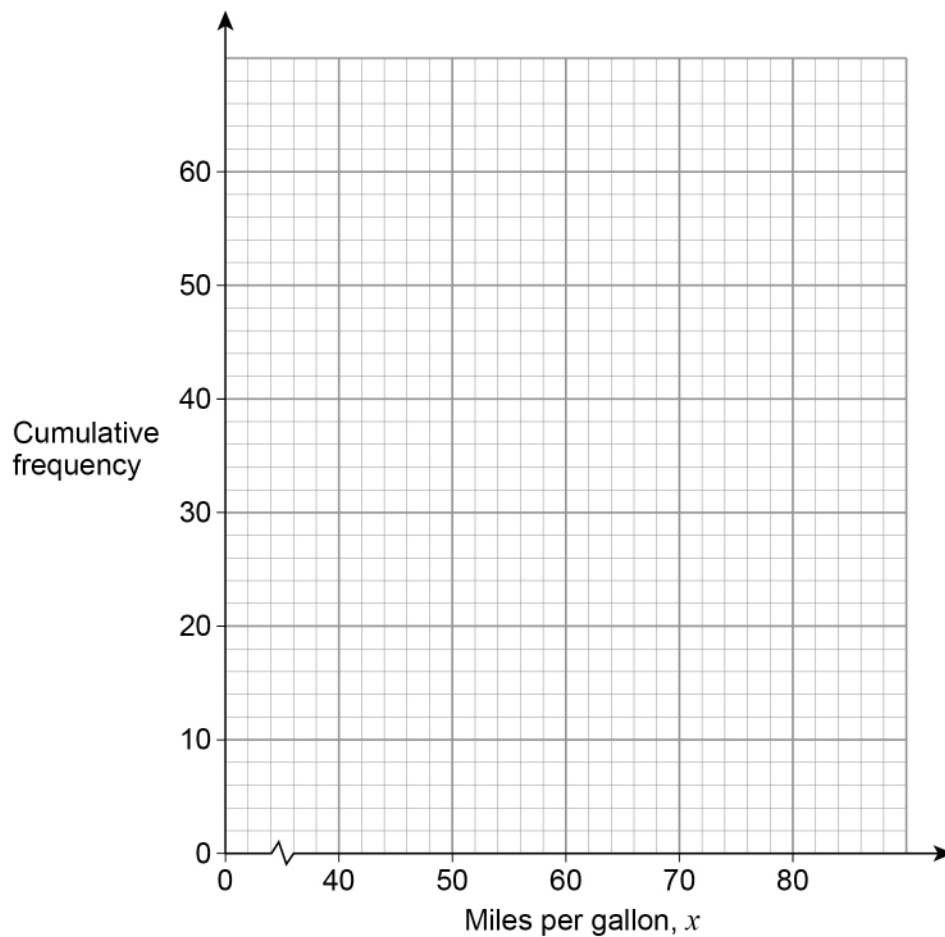


22 Here is some information about the miles per gallon of 60 cars.

Miles per gallon, x	Frequency		
$40 < x \leq 50$	6		
$50 < x \leq 60$	16		
$60 < x \leq 70$	28		
$70 < x \leq 80$	10		

22 (a) Draw a cumulative frequency graph.

[3 marks]



22 (b) Use the graph to work out the interquartile range.

[2 marks]

Answer _____ miles per gallon

23 The equation of a curve is $y = (x + 3)^2 + 5$

Circle the coordinates of the turning point.

[1 mark]

(5, 3)

(5, -3)

(3, 5)

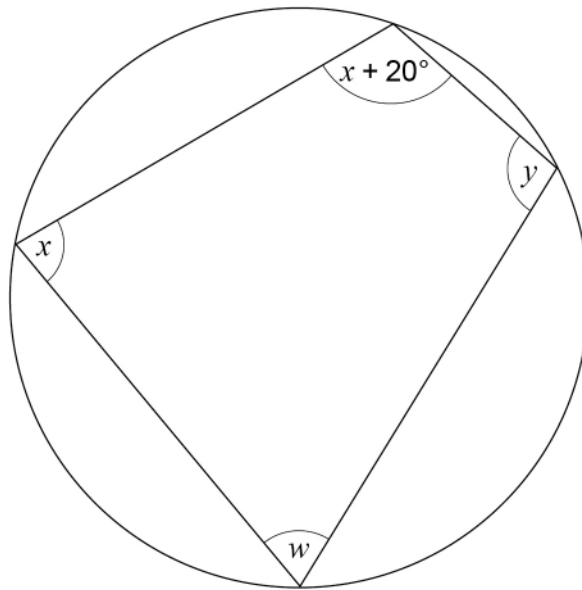
(-3, 5)

Turn over for the next question



24

Here is a cyclic quadrilateral.

Not drawn
accurately

$$x : y = 5 : 7$$

Work out the size of angle w .**[4 marks]**

Answer _____ degrees



25

15 machines work at the same rate.

Together, the 15 machines can complete an order in 8 hours.

3 of the machines break down after working for 6 hours.

The other machines carry on working until the order is complete.

In total, how many hours does **each** of the other machines work?

[3 marks]

Answer _____ hours

Turn over for the next question



26 (a) $0.\dot{7} = \frac{7}{9}$

Use this fact to show that $0.0\dot{7} = \frac{7}{90}$

[1 mark]

26 (b) Using part (a) or otherwise, convert $0.2\dot{7}$ to a fraction.
Give your answer in its simplest form.

[3 marks]

Answer _____



27

There are 11 pens in a box.

8 are black and 3 are red.

Two pens are taken out at random **without** replacement.

Work out the probability that the two pens are the **same** colour.

[4 marks]

Answer _____

8

Turn over ►

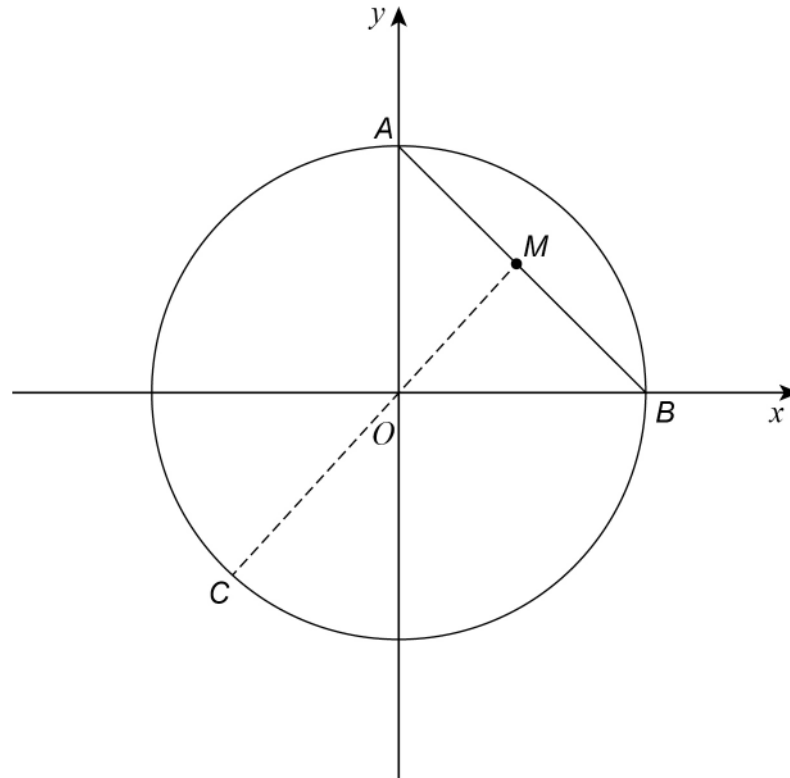
28 A , B and C are points on the circle $x^2 + y^2 = 36$ as shown.

A is on the y -axis.

B is on the x -axis.

M is the midpoint of AB .

COM is a straight line.



28 (a) Show that the coordinates of A are $(0, 6)$

[1 mark]

28 (b) Work out the coordinates of B .

[1 mark]

Answer (_____ , _____)



28 (c) Show that the equation of the straight line passing through C , O and M is $y = x$

[2 marks]

28 (d) Work out the coordinates of C .
Give your answers in surd form.

[3 marks]

Answer (_____ , _____)

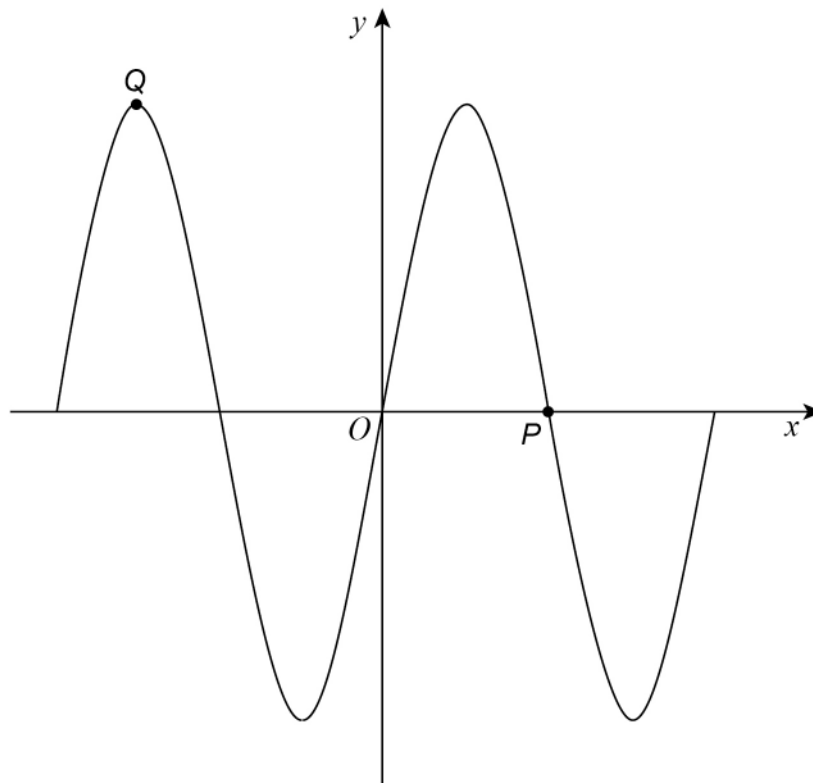
Turn over for the next question

7

Turn over ►



29 Here is a sketch of $y = \sin x^\circ$ for $-360 \leq x \leq 360$



29 (a) Write down the coordinates of P .

[1 mark]

Answer (_____ , _____)

29 (b) Write down the coordinates of Q .

[1 mark]

Answer (_____ , _____)



30 (a) Work out the value of $81^{\frac{1}{4}}$

[2 marks]

Answer _____

30 (b) Write 16×8^{2x} as a power of 2 in terms of x .

[3 marks]

Answer _____

END OF QUESTIONS



There are no questions printed on this page

**DO NOT WRITE ON THIS PAGE
ANSWER IN THE SPACES PROVIDED**

Copyright Information

For confidentiality purposes, from the November 2015 examination series, acknowledgements of third party copyright material will be published in a separate booklet rather than including them on the examination paper or support materials. This booklet is published after each examination series and is available for free download from www.aqa.org.uk after the live examination series.

Permission to reproduce all copyright material has been applied for. In some cases, efforts to contact copyright-holders may have been unsuccessful and AQA will be happy to rectify any omissions of acknowledgements. If you have any queries please contact the Copyright Team, AQA, Stag Hill House, Guildford, GU2 7XJ.

Copyright © 2017 AQA and its licensors. All rights reserved.

