

Please write clearly in block capitals.

Centre number

Candidate number

Surname \_\_\_\_\_

Forename(s) \_\_\_\_\_

Candidate signature \_\_\_\_\_

# GCSE MATHEMATICS

# F

Foundation Tier Paper 1 Non-Calculator

Thursday 25 May 2017

Morning


Time allowed: 1 hour 30 minutes

## Materials

For this paper you must have:

- mathematical instruments.

You must **not** use a calculator.



## Instructions

- Use black ink or black ball-point pen. Draw diagrams in pencil.
- Answer **all** questions.
- You must answer the questions in the spaces provided. Do not write outside the box around each page or on blank pages.
- Do all rough work in this book. Cross through any work you do not want to be marked.

## Information

- The marks for questions are shown in brackets.
- The maximum mark for this paper is 80.
- You may ask for more answer paper, graph paper and tracing paper. These must be tagged securely to this answer book.

## Advice

- In all calculations, show clearly how you work out your answer.

For Examiner's Use	
Pages	Mark
2–3	
4–5	
6–7	
8–9	
10–11	
12–13	
14–15	
16–17	
18–19	
20–21	
22–23	
<b>TOTAL</b>	



Answer **all** questions in the spaces provided

**1** How many minutes are there in  $3\frac{1}{2}$  hours?

Circle your answer.

[1 mark]

180.5

210

330

350

**2** Work out  $\frac{1}{4} + 0.5$

Circle your answer.

[1 mark]

0.30

0.6

0.75

0.9

**3** Which of these shapes has the most sides?

Circle your answer.

[1 mark]

Hexagon

Octagon

Rhombus

Trapezium



4 Solve  $x - 3 = 0$

Circle your answer.

[1 mark]

$x = -3$

$x = 0$

$x = \frac{1}{3}$

$x = 3$

5 Work out  $58 \times 73$

[3 marks]

---

---

---

---

---

---

---

Answer \_\_\_\_\_

7

Turn over ►



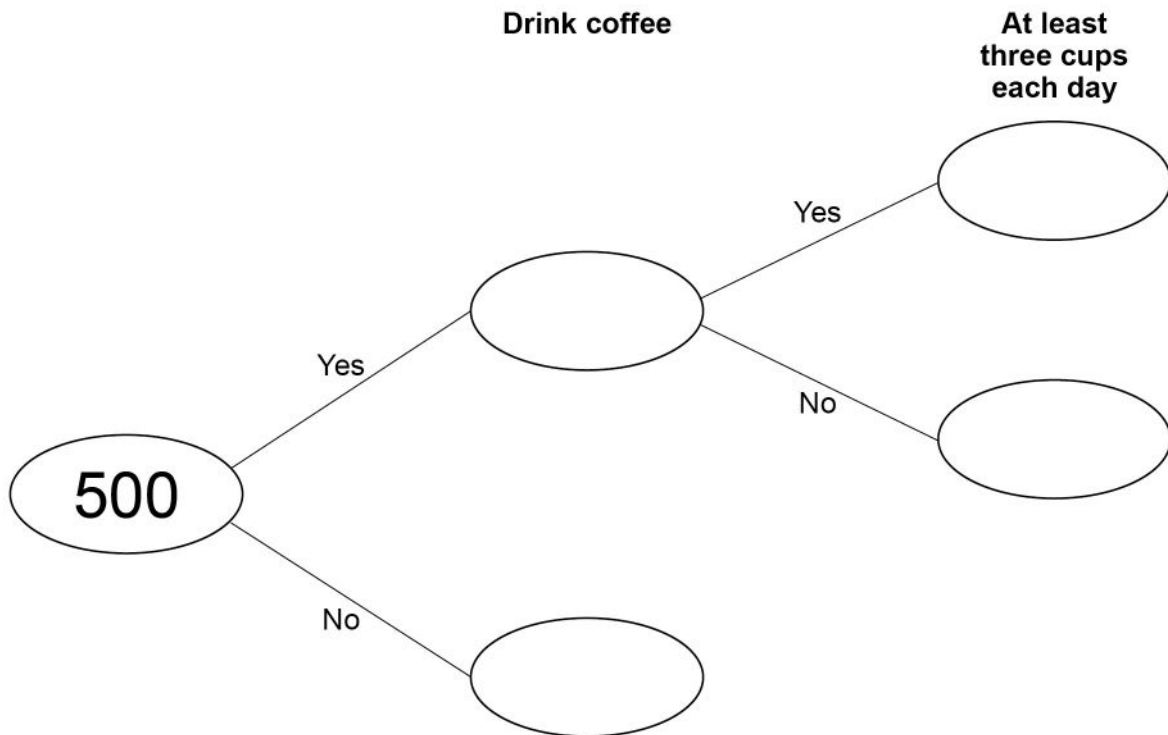
6 500 people are asked if they drink coffee.

$\frac{9}{10}$  say Yes.

20% of the people who say Yes drink at least three cups each day.

6 (a) Complete the frequency tree.

[4 marks]



- 6 (b)** What fraction of the 500 people drink at least three cups of coffee each day?  
Give your answer in its simplest form.

**[2 marks]**

---

---

Answer \_\_\_\_\_

- 7** By rounding each number to the nearest 10,

estimate the answer to  $\frac{61 \times 47}{102}$

You **must** show your working.

**[2 marks]**

---

---

---

Answer \_\_\_\_\_

**Turn over for the next question**





9 Work out  $25.68 \div 12$

[2 marks]

---

---

---

---

---

Answer \_\_\_\_\_

10 Work out  $\frac{3}{8} \times 11$

Give your answer as a mixed number.

[2 marks]

---

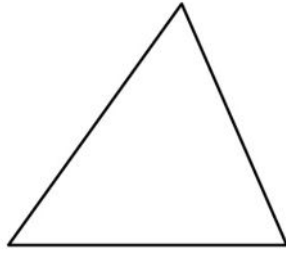
---

---

Answer \_\_\_\_\_




11 A triangle has perimeter 32 cm



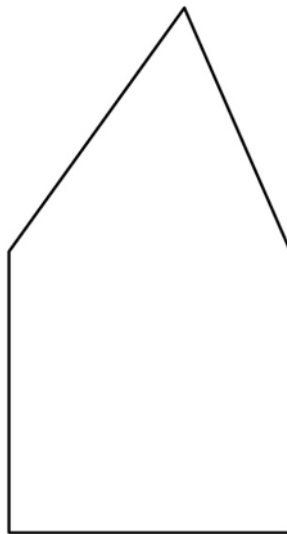
Not drawn  
accurately

A square has perimeter 40 cm



Two sides of the shapes are put together to make a pentagon.

Not drawn  
accurately





Work out the perimeter of the pentagon.

**[4 marks]**

---

---

---

---

---

---

---

---

---

---

Answer \_\_\_\_\_ cm

**Turn over for the next question**

4

**Turn over ►**



**12** A football team has  $P$  points.

$$P = 3W + D$$

$W$  is the number of wins

$D$  is the number of draws

**12 (a)** A team has 6 wins and 2 draws.

How many points does the team have?

[1 mark]

---

---

Answer \_\_\_\_\_

**12 (b)** After 33 games a different team has 53 points.  
11 games were draws.

How many games has this team **lost**?

[4 marks]

---

---

---

---

---

---

---

Answer \_\_\_\_\_



13

$$2 + 0 + 1 + 7 = 10$$

Make the following calculations correct.

Use only the symbols  $+$ ,  $-$ ,  $\times$ ,  $\div$  and  $( )$

**[3 marks]**

$$2 \quad 0 \quad 1 \quad 7 = -4$$

$$2 \quad 0 \quad 1 \quad 7 = 0$$

$$2 \quad 0 \quad 1 \quad 7 = 2^4$$

**Turn over for the next question**

**Turn over ►**

- 14** A number is picked at random from the first four **prime** numbers.  
A number is picked at random from the first four **square** numbers.  
The two numbers are added to get a score.

- 14 (a)** Complete the table.

**[4 marks]**

		Square numbers				
		+	1	4	9	
Prime numbers	2					
	3			12		
	7					

- 14 (b)** What is the probability that the score is a **prime** number?

**[1 mark]**

Answer \_\_\_\_\_



15

In a school show,

girls : boys = 1 : 1

girls who sing : girls who do not sing = 1 : 2

8 girls **sing** in the show.

How many students are in the show altogether?

**[3 marks]**

---

---

---

---

---

---

---

---

Answer \_\_\_\_\_

**Turn over for the next question****Turn over ►**

**16**  $P$  and  $Q$  are points on the line  $3x + 2y = 6$

**16 (a)** Complete the coordinates of  $P$  and  $Q$ .

**[2 marks]**

---

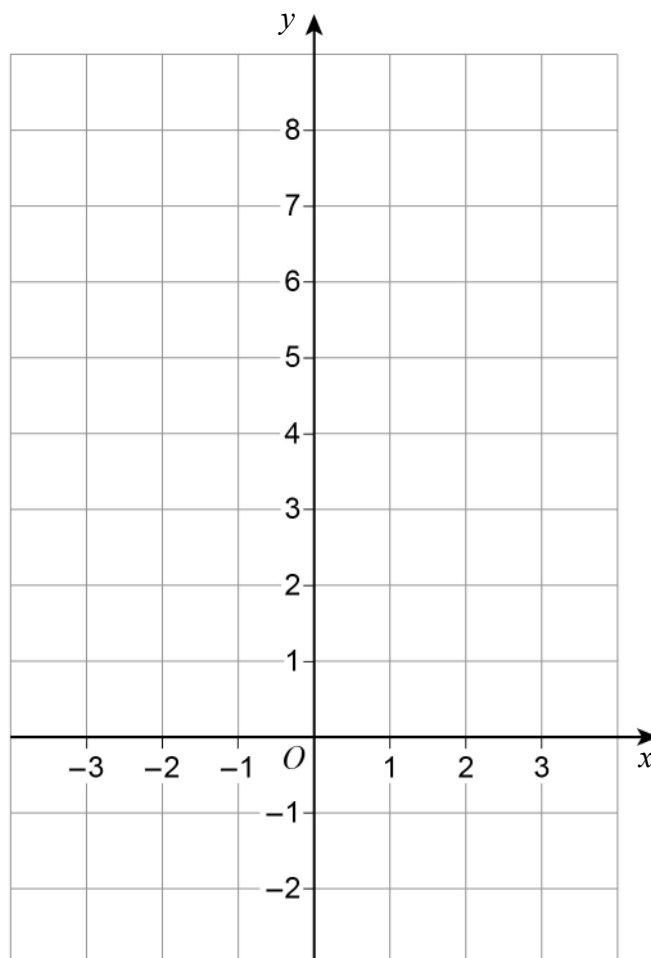
---

---

$P ( 0 , \underline{\hspace{1cm}} )$        $Q ( \underline{\hspace{1cm}} , 0 )$

**16 (b)** Draw the line  $3x + 2y = 6$  for values of  $x$  from  $-3$  to  $3$

**[2 marks]**



17 Circle the expression which does **not** simplify to  $y^3$

[1 mark]

$y \times y \times y$

$y^4 \div y$

$y^2 \times y$

$y^6 \div y^2$

18 Write the number six million five thousand two hundred in standard form.

[2 marks]

---

---

---

Answer \_\_\_\_\_

**Turn over for the next question**

7

**Turn over ►**



**19 (a)** Use  $8 \text{ km/h} = 5 \text{ mph}$  to convert  $96 \text{ km/h}$  to  $\text{mph}$

**[2 marks]**

---

---

---

---

---

Answer \_\_\_\_\_  $\text{mph}$

**19 (b)**  $x \text{ km/h} = y \text{ mph}$

Use  $8 \text{ km/h} = 5 \text{ mph}$  to write a formula for  $y$  in terms of  $x$ .

**[2 marks]**

---

---

---


Answer \_\_\_\_\_





20

Here is a circle touching a square.

Not drawn  
accuratelyThe area of the square is  $64 \text{ cm}^2$ 

Work out the area of the circle.

Give your answer in terms of  $\pi$ .**[3 marks]**

---

---

---

---

Answer \_\_\_\_\_  $\text{cm}^2$ **Turn over for the next question****Turn over ►**



**22 (a)** Density =  $\frac{\text{mass}}{\text{volume}}$

The mass of solid A is 6 times the mass of solid B.

The volume of solid A is 3 times the volume of solid B.

Complete the sentence.

[1 mark]

The density of solid A is \_\_\_\_\_ times the density of solid B.

**22 (b)** Average speed =  $\frac{\text{distance}}{\text{time}}$

If the distance is halved and the time is doubled, what happens to the average speed?

Circle your answer.

[1 mark]

$\times 2$        $\times 4$       no change       $\div 2$        $\div 4$

**Turn over for the next question**



**23** A regular polygon has an exterior angle of  $20^\circ$

Work out the number of sides of the polygon.

**[2 marks]**

---

---

---

---

Answer \_\_\_\_\_

**24**  $\frac{1}{2} : \frac{2}{3} = x : 1$

Circle the value of  $x$ .

**[1 mark]**

$$\frac{1}{3}$$

$$\frac{3}{5}$$

$$\frac{3}{4}$$

$$\frac{4}{3}$$



25

The table shows information about the times for 10 people to complete a task.

Time, $t$ (minutes)	Frequency
$0 < t \leq 20$	1
$20 < t \leq 40$	6
$40 < t \leq 60$	3

These statements are about the mean and range of the actual times.

Tick the correct box for each statement.

[4 marks]

	True	False
The mean could be less than 20 minutes	<input type="checkbox"/>	<input type="checkbox"/>
The mean could be more than 40 minutes	<input type="checkbox"/>	<input type="checkbox"/>
The mean could be less than 40 minutes	<input type="checkbox"/>	<input type="checkbox"/>
The range could be more than 40 minutes	<input type="checkbox"/>	<input type="checkbox"/>
The range could be less than 40 minutes	<input type="checkbox"/>	<input type="checkbox"/>
The range could be more than 60 minutes	<input type="checkbox"/>	<input type="checkbox"/>

Turn over ►



- 26** Write 36 as a product of prime factors.  
Give your answer in index form.

**[3 marks]**

Answer \_\_\_\_\_

- 27** Circle the value of  $\cos 90^\circ$

**[1 mark]**

0

$\frac{1}{2}$

$\frac{\sqrt{3}}{2}$

1



**28** Solve the simultaneous equations.

$$2x + y = 18$$

$$x - y = 6$$

**[3 marks]**

---

---

---

---

---

---

---

---

---

---

Answer \_\_\_\_\_

**END OF QUESTIONS**

7



**There are no questions printed on this page**

**DO NOT WRITE ON THIS PAGE  
ANSWER IN THE SPACES PROVIDED**

**Copyright Information**

For confidentiality purposes, from the November 2015 examination series, acknowledgements of third party copyright material will be published in a separate booklet rather than including them on the examination paper or support materials. This booklet is published after each examination series and is available for free download from [www.aqa.org.uk](http://www.aqa.org.uk) after the live examination series.

Permission to reproduce all copyright material has been applied for. In some cases, efforts to contact copyright-holders may have been unsuccessful and AQA will be happy to rectify any omissions of acknowledgements. If you have any queries please contact the Copyright Team, AQA, Stag Hill House, Guildford, GU2 7XJ.

Copyright © 2017 AQA and its licensors. All rights reserved.

