

Surname	Centre Number	Candidate Number
First name(s)		0



GCSE

3310U30-1



TUESDAY, 3 NOVEMBER 2020 – MORNING

**MATHEMATICS – NUMERACY
UNIT 1: NON-CALCULATOR
INTERMEDIATE TIER**

1 hour 45 minutes

ADDITIONAL MATERIALS

The use of a calculator is not permitted in this examination.
A ruler, a protractor and a pair of compasses may be required.

INSTRUCTIONS TO CANDIDATES

Use black ink or black ball-point pen. Do not use gel pen or correction fluid.

You may use a pencil for graphs and diagrams only.

Write your name, centre number and candidate number in the spaces at the top of this page.

Answer **all** the questions in the spaces provided.

If you run out of space, use the additional page at the back of the booklet. Question numbers must be given for all work written on the additional page.

Take π as 3.14.

INFORMATION FOR CANDIDATES

You should give details of your method of solution when appropriate.

Unless stated, diagrams are not drawn to scale.

Scale drawing solutions will not be acceptable where you are asked to calculate.

The number of marks is given in brackets at the end of each question or part-question.

In question 2(a), the assessment will take into account the quality of your linguistic and mathematical organisation, communication and accuracy in writing.

For Examiner's use only		
Question	Maximum Mark	Mark Awarded
1.	5	
2.	12	
3.	6	
4.	3	
5.	3	
6.	11	
7.	6	
8.	11	
9.	3	
10.	3	
11.	6	
12.	6	
13.	5	
Total	80	

3310U301
01



NOV203310U30101

Formula List – Intermediate Tier

Area of trapezium = $\frac{1}{2}(a + b)h$



Volume of prism = area of cross-section \times length



1. Marium buys some blueberries and strawberries.



Blueberries cost £4 per kg



Strawberries cost £3.60 per kg

Marium buys 1.5 kg of blueberries.
She receives £6.80 change from a £20 note.

Calculate the mass of the strawberries that Marium buys. [5]

.....

.....

.....

.....

.....

.....

.....

.....

.....

.....

.....

.....

.....

.....

.....

.....

.....

.....

.....

.....

.....

.....

.....

.....

3310U301
03



(b)

Remember:
1 inch \approx 2.5 cm

The height of a fully-grown Jack Russell dog is between 25 cm and 30 cm.
A fully-grown Jack Russell dog has a mass of between 6 kg and 8 kg.

Complete each of the following statements.

(i) 'The height of a fully-grown Jack Russell dog is between

..... inches and inches.' [3]

.....
.....
.....
.....

(ii) 'A fully-grown Jack Russell dog has a mass of between

..... pounds and pounds.' [3]

.....
.....
.....
.....

3310U301
05



3. (a) The map shows part of Wales.



(i) Write down the bearing of Rhyll from Caernarfon. [1]

.....
°

(ii) Name the place on the map that is on a bearing of 145° from Colwyn Bay. [2]

.....

(b) Another map has a scale of 1 : 20 000.
Gwen measures 3.5 cm on this map.
What distance does this represent in **metres**? [3]

.....
.....
.....
.....

..... metres



4. A new runway is to be built at an airport.

The plan below shows some of the angles.

Bryn has been asked to complete the plan by finding each of the missing angles, x , y and z .

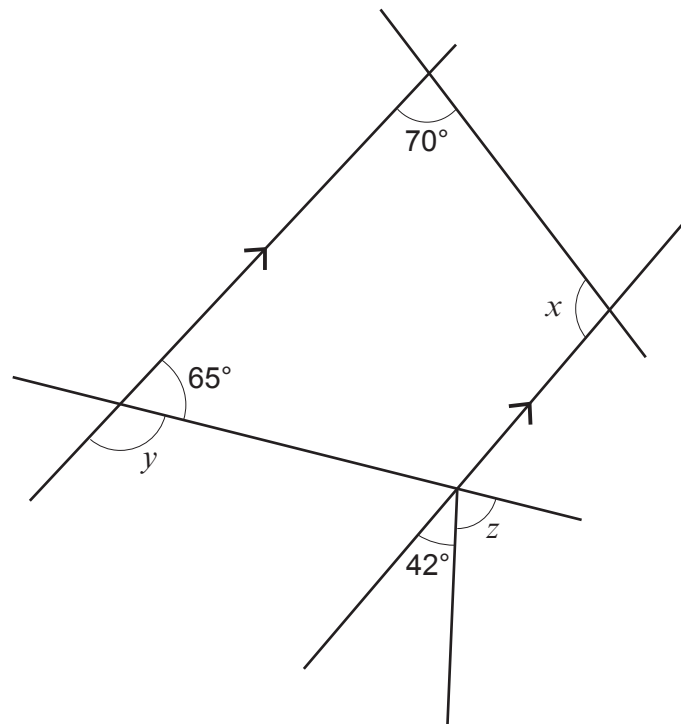



Diagram not drawn to scale

Calculate the size of each of the angles x , y and z .

[3]

.....

.....

.....

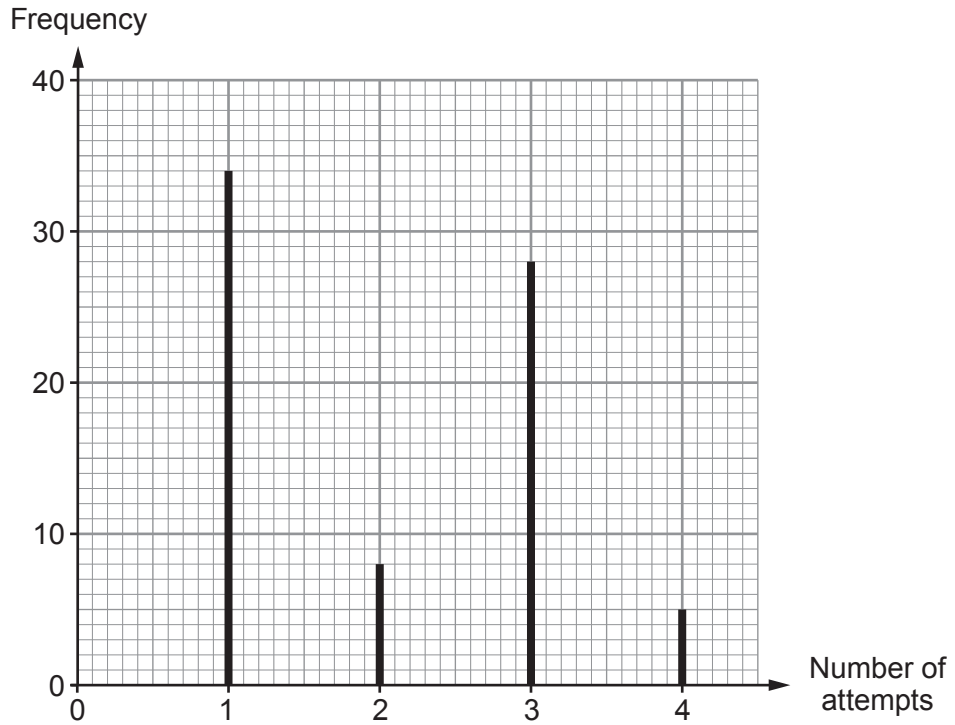
.....

$x =$ $^{\circ}$ $y =$ $^{\circ}$ $z =$ $^{\circ}$



5. In an office, the ICT technician recorded the number of attempts each of 75 employees took to enter their correct password into a computer.

The results are displayed below.



- (a) What was the modal number of attempts taken to enter the correct password?
Circle your answer.

[1]

1

2

2.5

3

4

.....

- (b) What was the median number of attempts taken to enter the correct password?
Circle your answer.

[1]

1

2

2.5

3

4

.....



- (c) A further 10 employees attempted to enter their correct password into a computer.
The median number of attempts for all these 85 employees is 3.

Did any of these 10 employees take fewer than 3 attempts to enter their correct password?

Yes No

You must show working to support your answer. [1]

.....

.....

.....

.....

.....

.....

.....

.....

3310U301
09



6. (a) Rowan is going to make some muffins.

To make the muffins, he buys:

- muffin cases,
- ingredients,
- 1 flag per muffin, for decoration.



A pack of 16 muffin cases costs 22p.
The ingredients to make 6 muffins cost 25p.
A bag of 12 flags costs 40p.

Rowan buys 4 bags of flags.

Rowan plans to make as many muffins as possible and have no cases, ingredients or flags left over.

He will sell the muffins for 30p each.

Calculate Rowan's profit when he sells all the muffins he makes.
You must show all your working.

[8]

.....

.....

.....

.....

.....

.....

.....

.....

.....

.....

.....

.....

.....

.....

.....

.....

.....

.....

.....

.....

.....

.....

.....

.....



(b) Gerry makes biscuits.
Each box of biscuits costs him 80p to make.
He sells them for £4 a box.

Calculate the percentage profit Gerry makes on each box sold. [2]

.....

.....

.....

.....

.....

.....

(c) Chloe makes flapjacks.
A pack of flapjacks costs Chloe 60p to make.
She sells the flapjacks for a profit of 30%.
For how much does Chloe sell a pack of flapjacks?
Circle your answer.

[1]

90p 66p 72p 78p 42p

.....

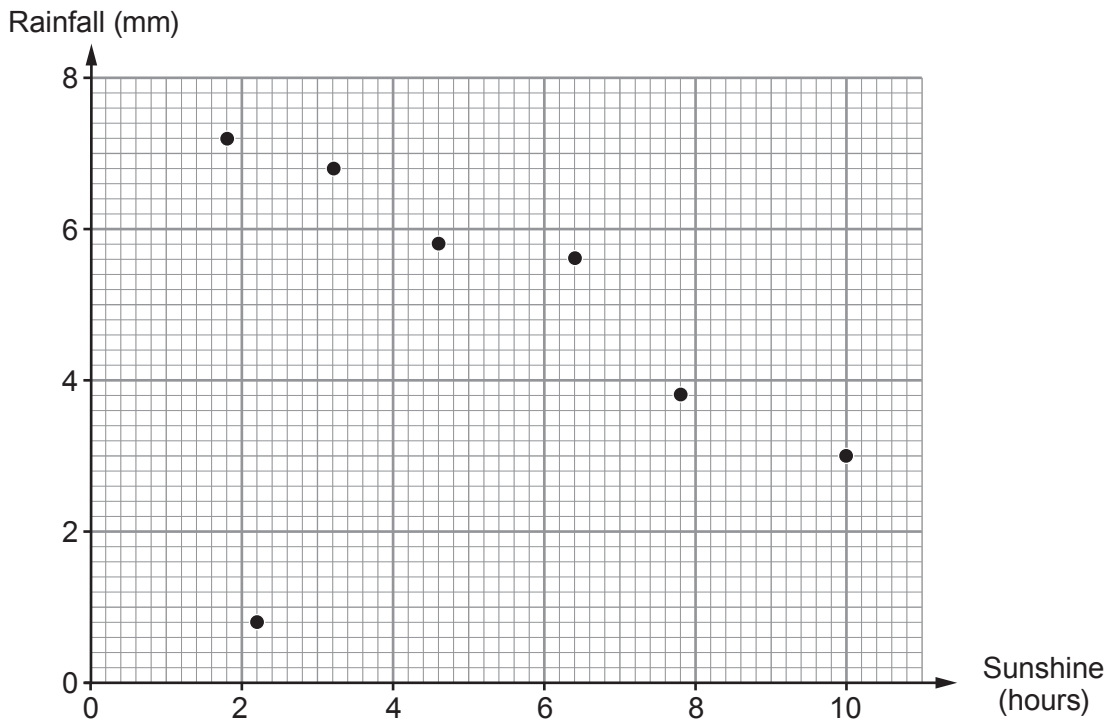
.....

.....

.....



7. (a) Rosie recorded the rainfall and the number of hours of sunshine each day last week.



(i) On one day last week, the number of hours of sunshine was low and the rainfall was lower than on any other day. Which day was it? Circle your answer. [1]

Saturday Sunday Monday Tuesday Can't tell

(ii) Rosie says,

There will be a positive correlation between rainfall and the number of hours of sunshine next week.

Is Rosie correct?

Yes No

You must give a reason for your answer.

[1]

.....

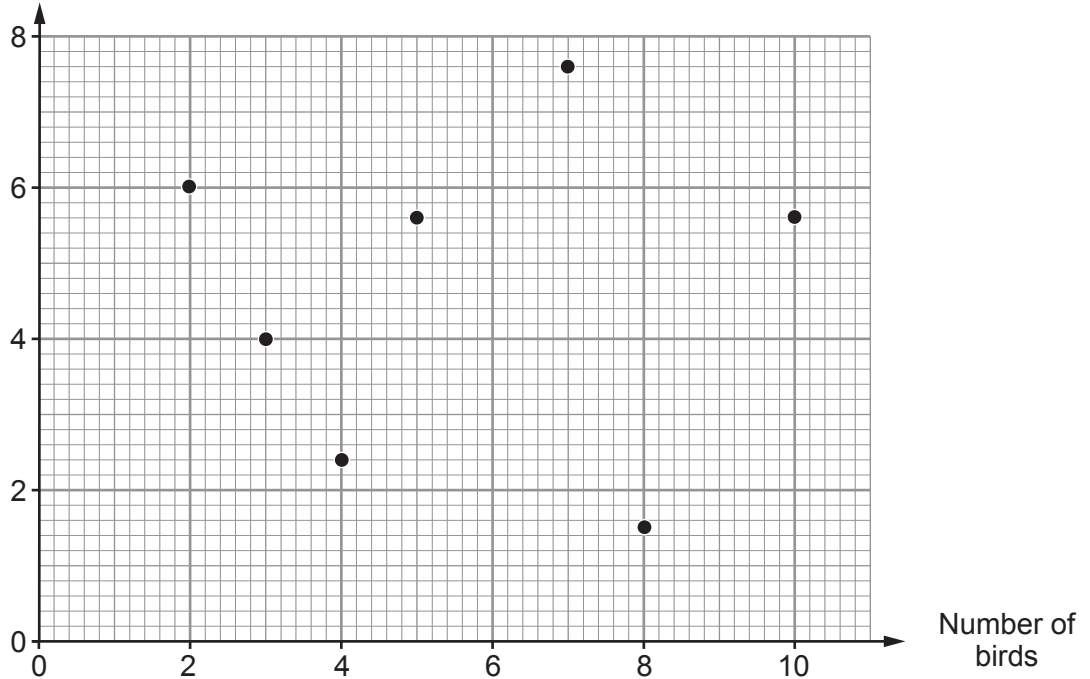
.....

.....



(b) At 3 p.m. each day last week, Rosie recorded the wind speed and the number of birds feeding in her garden.

Wind speed (mph)



(i) Was there a correlation between wind speed and the number of birds feeding in Rosie's garden last week?

Yes No

You must give a reason for your answer. [1]

(ii) The greatest wind speed at 3 p.m. last week was on Tuesday. How many birds were feeding in Rosie's garden at this time? [1]

..... birds

(iii) On Wednesday last week, the wind speed at 3 p.m. was a quarter of that on Friday. Complete the following table. [2]

Day	Wind speed (mph)
Wednesday
Friday



8. Albert, Terri and Gareth are going camping.

- (a) Albert, Terri and Gareth paid for a tent between them.
The amount they each paid for the tent was in the ratio 1 : 4 : 6 respectively.
Gareth paid £66.36 towards the tent.

Calculate the cost of the tent.

[3]

.....

.....

.....

.....

.....

.....

- (b) The charge to stay at a campsite has increased by 5% each year for the last two years.
Two years ago, the charge was £24 per night for a large tent and three people.

Calculate the current charge per night for a large tent and three people.
You must show all your working.

[4]

.....

.....

.....

.....

.....

.....

.....

.....

.....

.....

.....

.....

.....

.....

.....

.....



(c) The diagram shows the groundsheet of a tent.

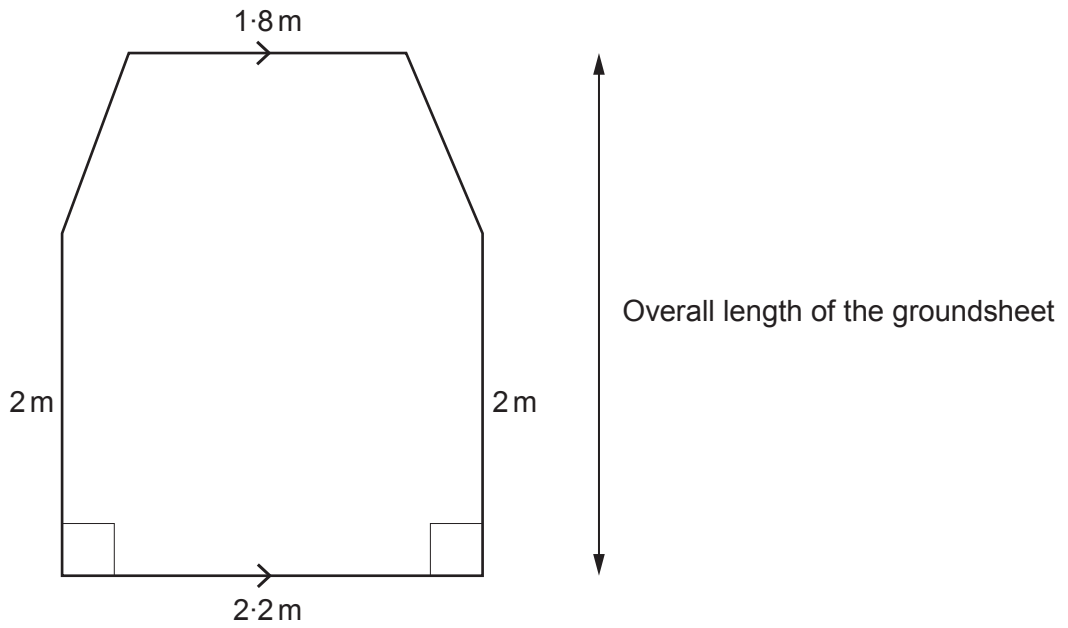


Diagram not drawn to scale

The area of the groundsheet is 6.8 m^2 .
The width of the groundsheet is 2.2 m .
Calculate the overall length of the groundsheet.

[4]

.....

.....

.....

.....

.....

.....

.....

.....

.....

.....

.....

.....

.....

.....

.....

.....

.....

.....

.....

.....



9. The scale diagram below shows Haydn's garden.

His garden is 27 metres long and 18 metres wide.
The scale used is **1 cm represents 3 metres**.

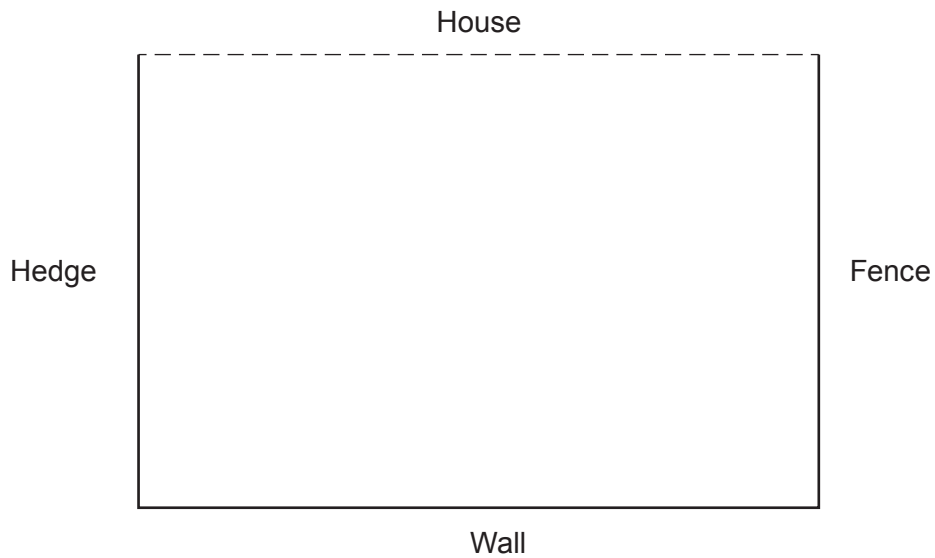
Haydn is planting a tree in his garden.

He decides that the tree must be planted:

- 15 metres from the fence,
- equidistant from the house and the fence.

Draw suitable lines on the diagram and show where Haydn should plant the tree. [3]

1 cm represents 3 metres



10. There are 600 pupils in a school.
8 of these pupils are to be selected to discuss changes to the school uniform.

The headteacher has a spreadsheet of the names of all 600 pupils.
There are 600 rows of pupil names in the spreadsheet, starting at row 1.
There is one pupil name on each row.

The headteacher uses a systematic sampling method.

- (a) The first pupil selected on the headteacher's list is a boy whose name is in the 25th row.

Give the row numbers in the spreadsheet of the other 7 pupils who would be selected.
Complete the table below. [2]

.....

.....

.....

.....

.....

.....

.....

.....

Pupil	1st	2nd	3rd	4th	5th	6th	7th	8th
Row in the spreadsheet	25th

- (b) Explain how the headteacher selected the first pupil. [1]

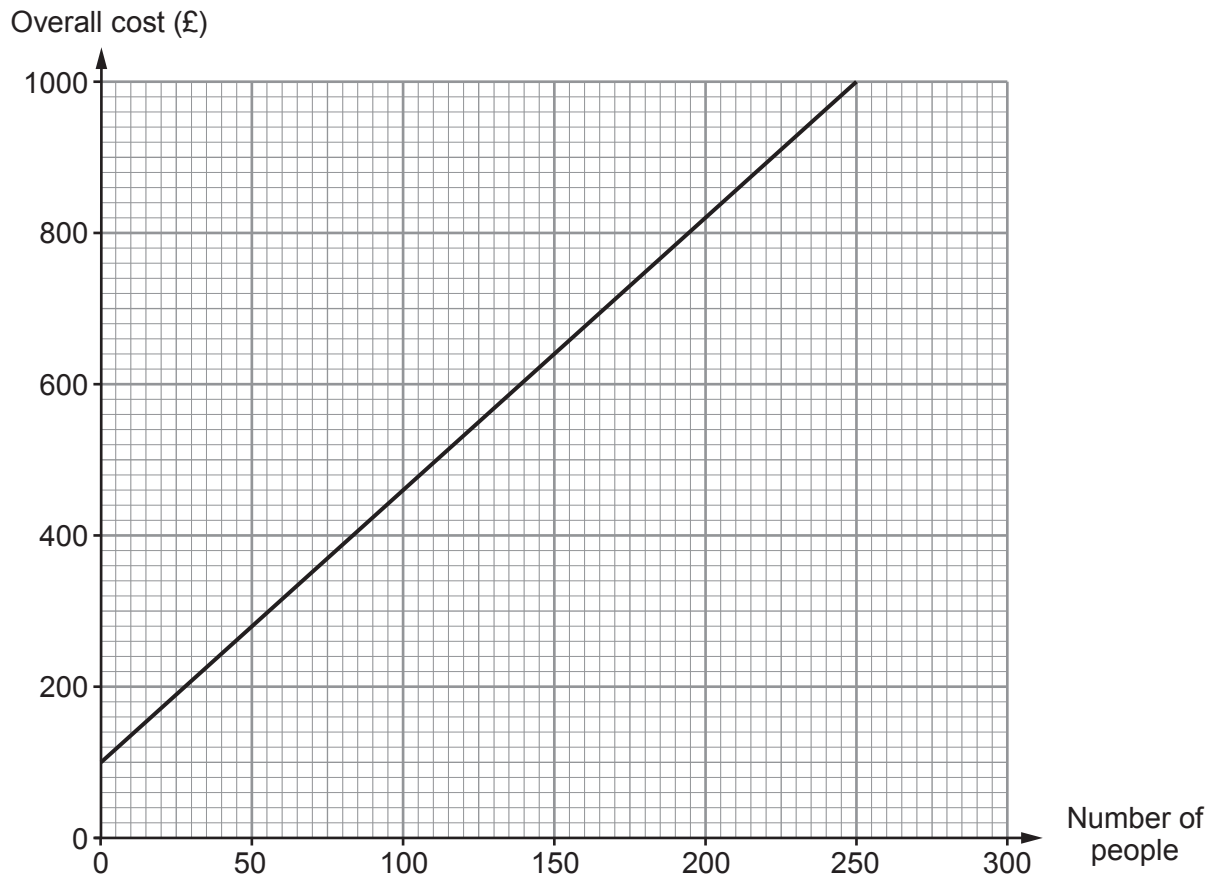
.....

.....



11. Meinir is planning a charity event to be held at a hotel.

A section of a straight line graph showing the hotel charges for this event is shown below. These charges include a single payment for the room hire and the cost of one drink for each person attending.



Meinir decides to pay the room hire cost herself.

She decides to price the tickets so that she will be able to make £500 to give to charity.



(a) Calculate the selling price of each ticket if Meinir plans the event for 50 people. [3]

.....

.....

.....

.....

.....

.....

.....

.....

.....

.....

(b) Calculate the selling price of each ticket if Meinir plans the event for 400 people. [3]

.....

.....

.....

.....

.....

.....

.....

.....

.....

.....



12. (a) A square piece of card measures 1 m by 1 m.

Calculate the area of this piece of card.
Give your answer in **standard form** in mm^2 .

[2]

.....
.....
.....

..... mm^2

(b) Some fabric shrinks when it is washed.

A piece of fabric is washed twice.

After the first wash, the area of the fabric is 75% of the area of the original piece of fabric.
After the second wash, the area of the fabric is 90% of the area of the fabric after the first wash.

After these two washes, the area of the fabric is 2700 cm^2 .

Calculate the area of the original piece of fabric.

[4]

.....
.....
.....
.....
.....
.....
.....
.....
.....
.....
.....
.....
.....
.....
.....
.....
.....
.....
.....
.....
.....



BLANK PAGE

**PLEASE DO NOT WRITE
ON THIS PAGE**



BLANK PAGE

**PLEASE DO NOT WRITE
ON THIS PAGE**

