

Surname	Centre Number	Candidate Number
First name(s)		0



GCSE

3310U40-1



THURSDAY, 5 NOVEMBER 2020 – MORNING

**MATHEMATICS – NUMERACY
UNIT 2: CALCULATOR-ALLOWED
INTERMEDIATE TIER**

1 hour 45 minutes

ADDITIONAL MATERIALS

A calculator will be required for this paper.
A ruler, a protractor and a pair of compasses may be required.

INSTRUCTIONS TO CANDIDATES

Use black ink or black ball-point pen. Do not use gel pen or correction fluid.
You may use a pencil for graphs and diagrams only.
Write your name, centre number and candidate number in the spaces at the top of this page.
Answer **all** the questions in the spaces provided.
If you run out of space, use the additional page at the back of the booklet. Question numbers must be given for all work written on the additional page.
Take π as 3.14 or use the π button on your calculator.

INFORMATION FOR CANDIDATES

You should give details of your method of solution when appropriate.
Unless stated, diagrams are not drawn to scale.
Scale drawing solutions will not be acceptable where you are asked to calculate.
The number of marks is given in brackets at the end of each question or part-question.
In question 2, the assessment will take into account the quality of your linguistic and mathematical organisation, communication and accuracy in writing.

For Examiner's use only		
Question	Maximum Mark	Mark Awarded
1.	5	
2.	7	
3.	7	
4.	10	
5.	3	
6.	6	
7.	7	
8.	4	
9.	11	
10.	4	
11.	6	
12.	6	
13.	4	
Total	80	

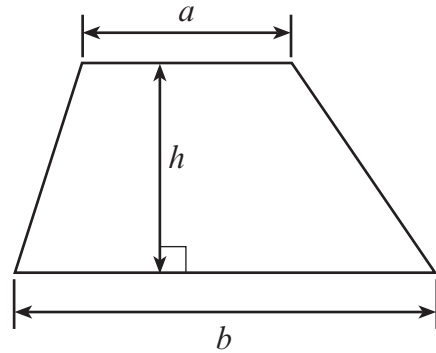
3310U401
01



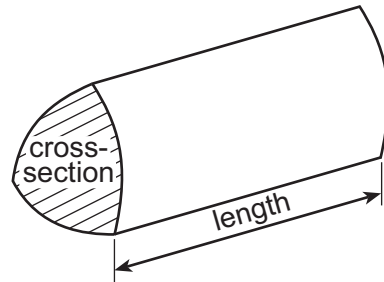
NOV203310U40101

Formula List – Intermediate Tier

Area of trapezium = $\frac{1}{2}(a + b)h$



Volume of prism = area of cross-section \times length



1. Maldwyn sells flags, scarves and hats outside a stadium.
At the end of a football match, Maldwyn sells his remaining flags, scarves and hats at sale prices.

(a)


Scarf



Was £4.97

Now $\frac{3}{7}$ off in the sale

Flag



£8.50 each

Buy 2 and get **26% off** the total price

- (i) Calculate the sale price of a scarf. [2]

.....

.....

.....

.....

- (ii) Calculate the cost of buying **two** flags in the sale. [2]

.....

.....

.....

.....

- (b) Before the sale, a hat cost £3.99.
In the sale, the hat costs £2.66.
By what fraction has the cost of the hat been **reduced**?
Circle your answer. [1]

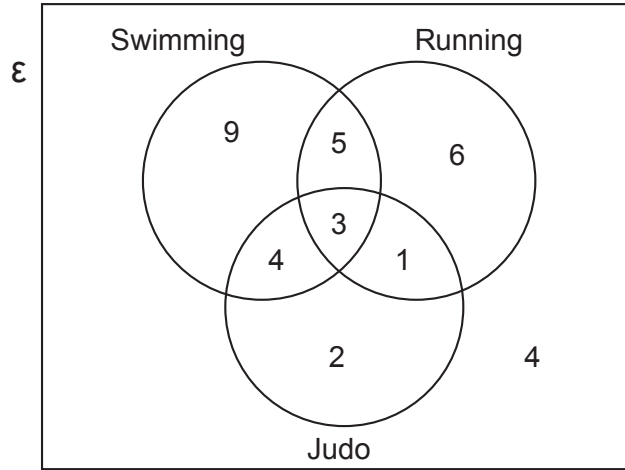
 $\frac{1}{4}$ $\frac{1}{3}$ $\frac{2}{3}$ $\frac{3}{4}$ $\frac{1}{2}$

.....

.....



3. There are 34 pupils in class 10A.
Dewi carried out a survey to find out how many of these pupils take part in swimming, running and judo.
He displayed his results in a Venn diagram, as shown below.



- (a) How many of the pupils in class 10A take part in both judo and running?
Circle your answer.

[1]

1 8 4 3 21

- (b) How many of the pupils in class 10A take part in swimming?
Circle your answer.

[1]

9 4 14 3 21

- (c) How many of the pupils in class 10A **do not** take part in judo?
Circle your answer.

[1]

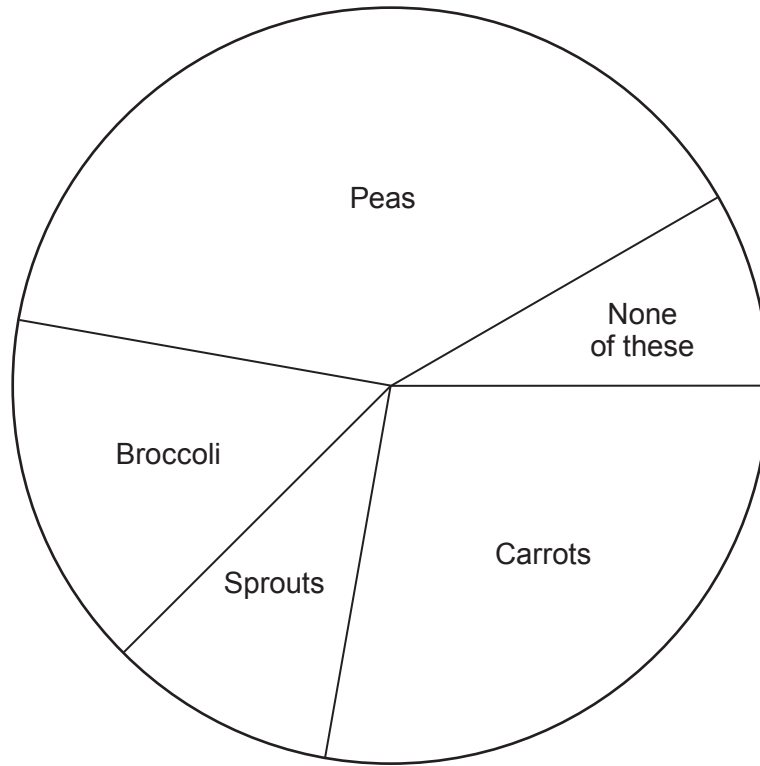
9 10 20 24 15

- (d) Calculate the percentage of the pupils in class 10A who **do not** take part in swimming, running or judo.
Give your answer correct to 1 decimal place.

[4]



4. (a) 1080 people were asked to choose their favourite vegetable. The pie chart shows the results.



- (i) How many people chose broccoli as their favourite vegetable? You must show all your working.

[3]

.....

.....

.....

.....



(ii) How many more people chose carrots than chose sprouts as their favourite vegetable?
 You must show all your working. [3]

.....

.....

.....

.....

.....

.....

.....

.....

.....

.....

.....

.....

.....

.....

.....

.....

.....

.....

.....

.....

(b) 420 people selected peas as their favourite vegetable.
 They were asked which they preferred: fresh peas, frozen peas or tinned peas.

Of these 420 people, $\frac{3}{14}$ said they preferred fresh peas.

Twice as many people preferred frozen peas to tinned peas.

How many of these people preferred frozen peas? [4]

.....

.....

.....

.....

.....

.....

.....

.....

.....

.....

.....

.....

.....

.....

.....

.....

.....

.....

.....

.....

.....

3310U401
07



5. Each week in Ysgol Derwen, the headteacher calculates the mean attendance for each class. This is the mean number of half-days per week that students have attended school from Monday to Friday.

There are 5 classes in Year 11.

The headteacher has partially completed a table recording Week 1 attendance for each class in Year 11, as shown below.

Class	Number of pupils	Total number of half-days attended in Week 1	Mean attendance for the 10 half-days in Week 1
11A	28	238	8.5
11B	25	7.4
11C	32	9.5
11D	30	270	9.0
11E	25	6.6
Total	

Complete the table.

Hence calculate the overall mean attendance for all of Year 11 in Week 1 at Ysgol Derwen. You must show all your working. [3]

.....

.....

.....

.....

.....

.....

.....

.....

Overall mean attendance for all of Year 11 is



7. In May 2018, the population of Wales was approximately 3 150 000.
Of this population, approximately 286 500 people were aged 75 or over.

In May 2018, a survey in Wales found the following:

- 85% of the population of Wales used the internet,
- 99% of people aged 16 to 24 used the internet,
- 40% of people aged 75 or over used the internet.

(a) In May 2018, how many people in Wales **did not** use the internet? [2]

.....

.....

.....

(b) Of all the internet users in Wales in May 2018, what percentage were aged 75 or over?
Give your answer correct to 2 significant figures.
You must show all your working. [5]

.....

.....

.....

.....

.....

.....

.....

.....

.....

.....



8. In Cuba, urban gardens are used for food production.

$$1 \text{ acre} \approx 0.00405 \text{ km}^2$$



35 000 acres of urban gardens in Cuba produced 3.4 million tonnes of food in 2002.

Calculate the number of tonnes of food produced per km^2 in urban gardens in Cuba in 2002.
You must show all your working. [4]

.....

.....

.....

.....

.....

.....

.....

.....

.....

.....

.....

.....

.....

.....

.....

.....

.....

.....

.....

.....

.....

.....

.....



9. Formula One cars are some of the fastest racing cars in the world.

The cars' top speeds are up to 375 km/h and their engines are limited to 15 000 rotations per minute.

The Monaco Grand Prix is the shortest Formula One race with 78 laps of the track and a total distance of 260.5 km.

Fernando Alonso won the Monaco Grand Prix in 2007. He completed the race with an average speed of 155.552 km/h.



(a) Complete the following statement.

'Top speeds of Formula One cars are up to mph.' [2]

.....
.....

(b) Calculate Alonso's average lap time for the 2007 Monaco Grand Prix. Give your answer in minutes. You must show all your working. [4]

.....
.....
.....
.....
.....
.....
.....
.....
.....
.....

(c) Which number from the list below would correctly complete the following statement? Circle your answer. [1]

'Formula One engines are limited to rotations **per second**.'

- 900 000 250 300 4.17 54 million

.....



11. (a) In March 2014, there were an estimated 6 550 000 000 two pence coins in circulation.

Calculate the value of these 2p coins in **pounds (£)**.
Give your answer in standard form.
You must show all your working.

[3]

.....

.....

.....

.....

.....

.....

- (b) The 2p coin is made from a mixture of metals.
It has a diameter of 25.9 mm and a thickness of 2.03 mm.

The 2p coin can be considered to be a cylinder.
Calculate the volume of metal in a 2p coin.



[3]

.....

.....

.....

.....

.....

.....

.....

.....

.....

.....



12. The Leaning Tower of Pisa stands on horizontal ground. The vertical height of the tower on the higher side is 56.7 m. The top of the tower is displaced 3.9 m horizontally.

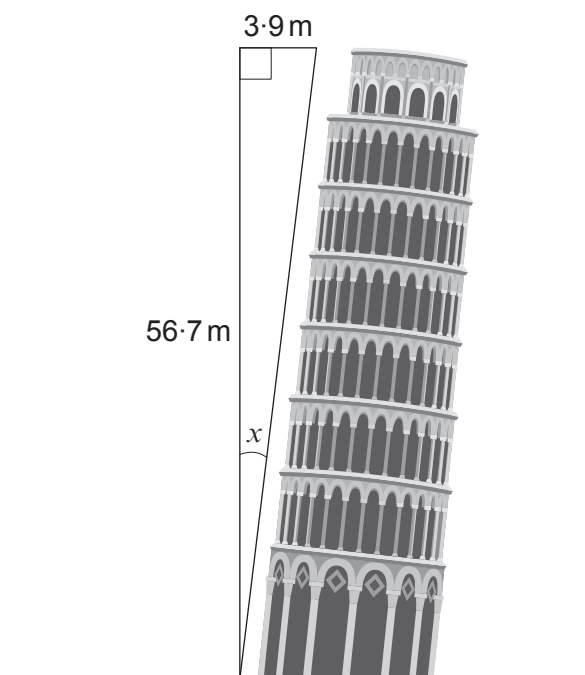


Diagram not drawn to scale

- (a) Calculate the angle, x , at which the tower leans. Give your answer correct to 2 decimal places. You must show all your working.

[4]

.....

.....

.....

.....

.....

.....

.....

.....



(b) Ceri plans to make a poster that is mathematically similar to the Leaning Tower of Pisa.

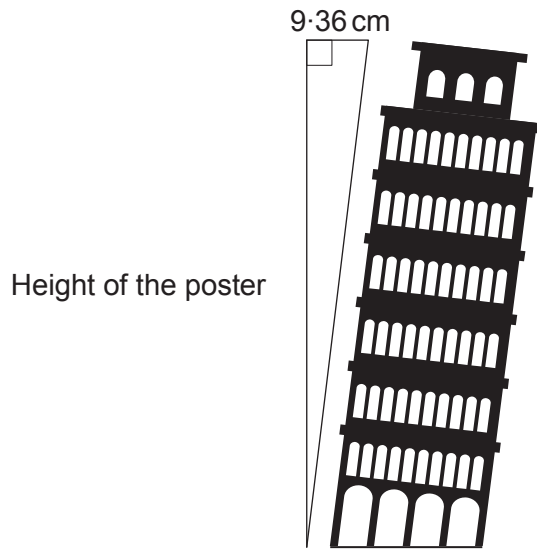


Diagram not drawn to scale

Calculate the height of the poster Ceri plans to make.

[2]

.....

.....

.....

.....

.....

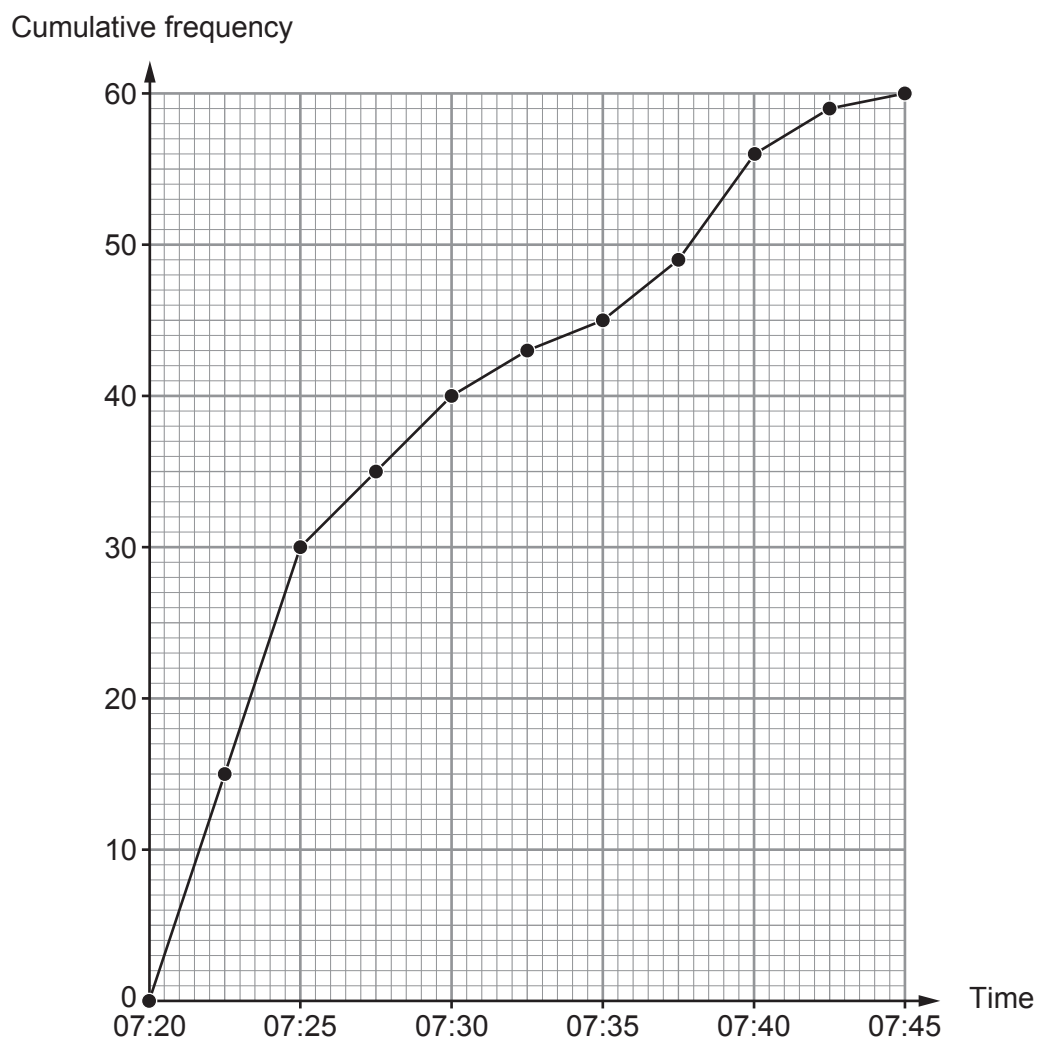
.....

.....



13. On Wednesday, there were no cars in a car park when it opened at 7:00 a.m. From 7:00 a.m., the number of cars entering the car park was recorded.

The cumulative frequency diagram has been drawn from the results.



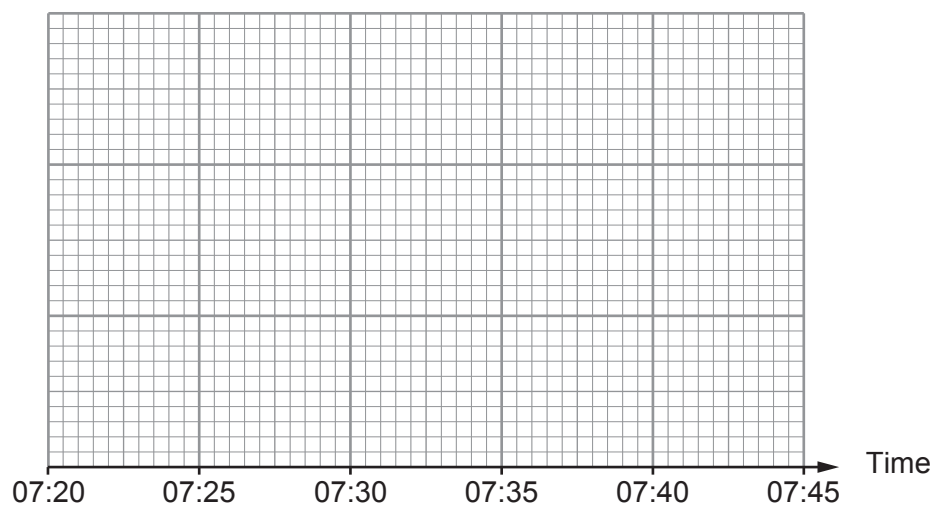
- (a) How many cars had entered the car park by 7:35 a.m.?

[1]



- (b) The first car entered the car park at 7:21 a.m.
The last car entered the car park at 7:44 a.m.

Draw a box-and-whisker plot using this information and the data from the cumulative frequency diagram. [3]



END OF PAPER



