

Surname	Centre Number	Candidate Number
First name(s)		0



**GCSE**

3300U50-1



A21-3300U50-1

**MONDAY, 8 NOVEMBER 2021 – MORNING**

**MATHEMATICS  
UNIT 1: NON-CALCULATOR  
HIGHER TIER**

1 hour 35 minutes

**ADDITIONAL MATERIALS**

The use of a calculator is not permitted in this examination.  
A ruler, a protractor and a pair of compasses may be required.

**INSTRUCTIONS TO CANDIDATES**

Use black ink or black ball-point pen. Do not use gel pen or correction fluid.

You may use a pencil for graphs and diagrams only.

Write your name, centre number and candidate number in the spaces at the top of this page.

Answer **all** the questions in the spaces provided.

If you run out of space use the additional page at the back of the booklet. Question numbers must be given for all work written on the additional page.

Take  $\pi$  as 3.14.

**INFORMATION FOR CANDIDATES**

You should give details of your method of solution when appropriate.

Unless stated, diagrams are not drawn to scale.

Scale drawing solutions will not be acceptable where you are asked to calculate.

The number of marks is given in brackets at the end of each question or part-question.

In question 1, the assessment will take into account the quality of your linguistic and mathematical organisation, communication and accuracy in writing.

For Examiner's use only		
Question	Maximum Mark	Mark Awarded
1.	5	
2.	5	
3.	4	
4.	3	
5.	5	
6.	3	
7.	5	
8.	5	
9.	3	
10.	4	
11.	2	
12.	3	
13.	3	
14.	5	
15.	5	
16.	3	
17.	2	
18.	5	
<b>Total</b>	<b>70</b>	

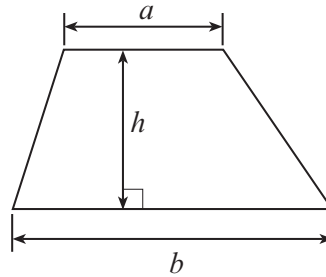
3300U501  
01



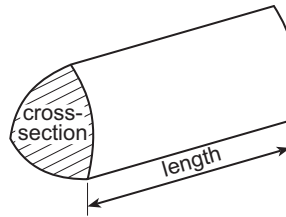
NOV213300U50101

## Formula List – Higher Tier

$$\text{Area of trapezium} = \frac{1}{2} (a + b)h$$

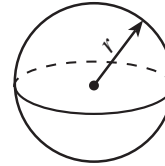


$$\text{Volume of prism} = \text{area of cross-section} \times \text{length}$$



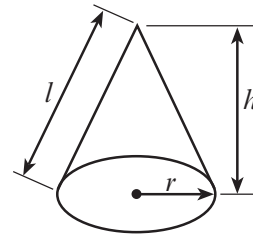
$$\text{Volume of sphere} = \frac{4}{3} \pi r^3$$

$$\text{Surface area of sphere} = 4\pi r^2$$



$$\text{Volume of cone} = \frac{1}{3} \pi r^2 h$$

$$\text{Curved surface area of cone} = \pi r l$$

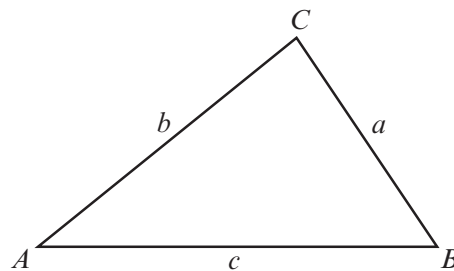


In any triangle  $ABC$

$$\text{Sine rule} \quad \frac{a}{\sin A} = \frac{b}{\sin B} = \frac{c}{\sin C}$$

$$\text{Cosine rule} \quad a^2 = b^2 + c^2 - 2bc \cos A$$

$$\text{Area of triangle} = \frac{1}{2} ab \sin C$$



### The Quadratic Equation

The solutions of  $ax^2 + bx + c = 0$  where  $a \neq 0$  are given by  $x = \frac{-b \pm \sqrt{(b^2 - 4ac)}}{2a}$

### Annual Equivalent Rate (AER)

AER, as a decimal, is calculated using the formula  $\left(1 + \frac{i}{n}\right)^n - 1$ , where  $i$  is the nominal interest rate per annum as a decimal and  $n$  is the number of compounding periods per annum.



1. In this question, you will be assessed on the quality of your organisation, communication and accuracy in writing.

The sizes of angles  $a$  and  $b$  in the triangle shown below are in the ratio 2 : 3.

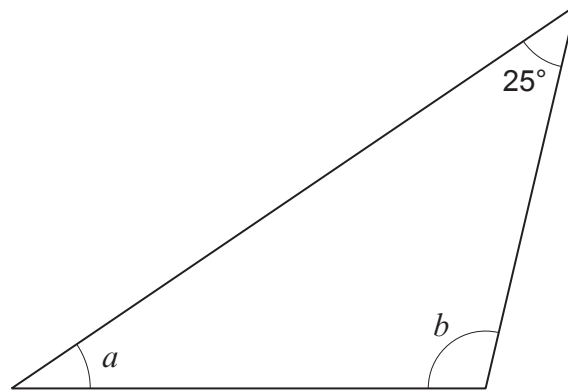


Diagram not drawn to scale

Calculate the size of each of the angles  $a$  and  $b$ .  
You must show all your working.

[3 + 2 OCW]

.....

.....

.....

.....

.....

.....

.....

.....

.....

.....

.....

.....

.....

.....

.....

.....

.....

.....

.....

.....

.....

.....

3300U501  
03



2. (a) Find the Lowest Common Multiple (LCM) of 60 and 72. [2]

.....

.....

.....

.....

.....

.....

.....

LCM of 60 and 72 is .....

(b) Express 882 as a product of its prime factors.  
Give your answer in index form. [3]

.....

.....

.....

.....

.....

.....

.....

.....

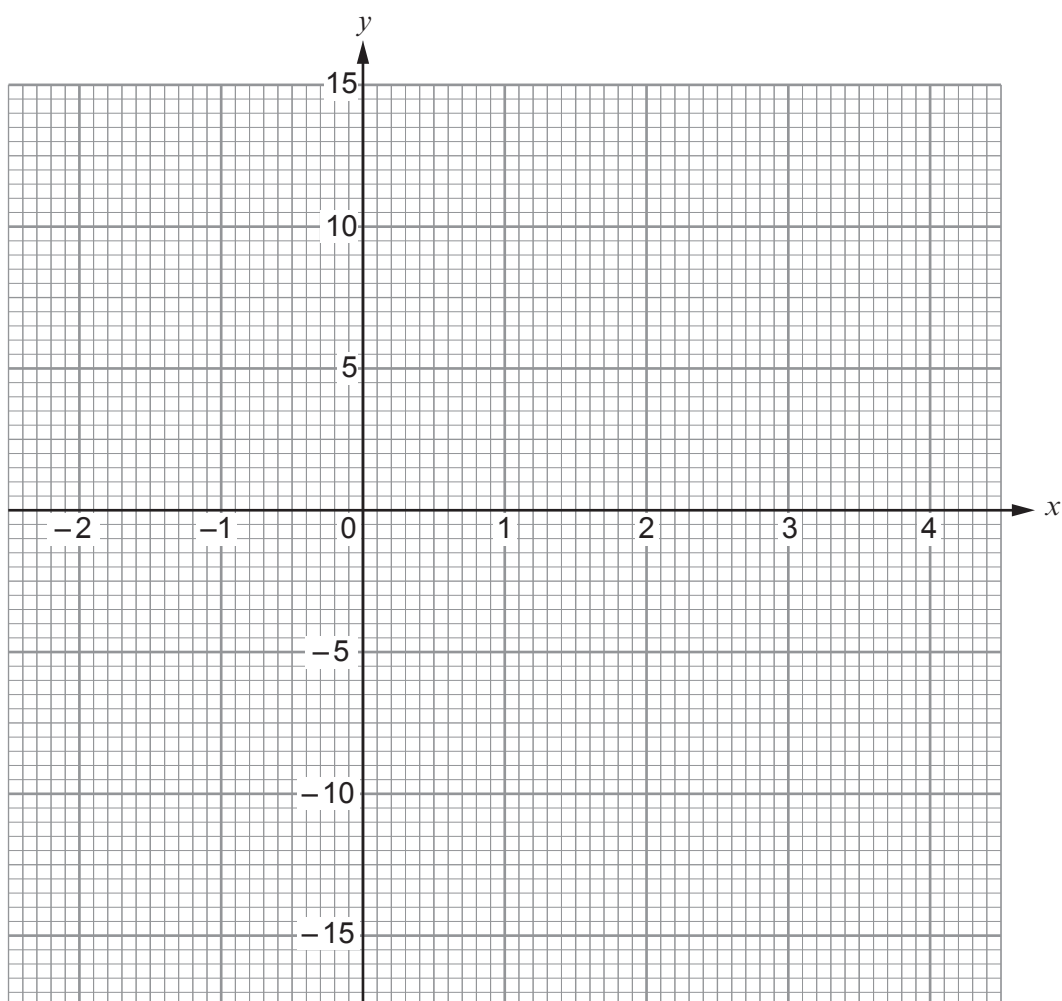
.....



3. Complete the table below.  
Draw the graph of  $y = 7 - x^2$  for values of  $x$  between  $-2$  and  $4$ .  
Use the graph paper below.

[4]

$x$	$-2$	$-1$	$0$	$1$	$2$	$3$	$4$
$y = 7 - x^2$	$3$		$7$	$6$	$3$		$-9$



4. Calculate the total perimeter of a semicircle of radius 4 cm.  
Take  $\pi$  to be 3.14.

[3]

.....

.....

.....

.....

.....



5. (a) Rearrange the following formula to make  $k$  the subject.

$$p = 3k + 2 \quad [2]$$

.....

.....

.....

.....

- (b) Does the midpoint of the straight line joining points (3, 15) and (7, 19) lie on the line  $y = 3x + 2$ ?  
You must show all your working. [3]

.....

.....

.....

.....

.....

.....

.....

.....

.....

6. (a) Express 0.0058 in standard form. [1]

.....

- (b) Calculate the value of  $\frac{1.4 \times 10^9}{2 \times 10^3}$ .

Give your answer in standard form. [2]

.....

.....

.....



7. A group of people have put their names forward to carry the Welsh flag at a sporting event. Each person lives in North Wales, Mid Wales or South Wales.

One person from the group is chosen at random.

The probability of choosing a person who lives in North Wales is 0.3.

The probability of choosing a person who lives in Mid Wales is 0.25.

The probability of choosing a person who is under 18 years old is 0.2.

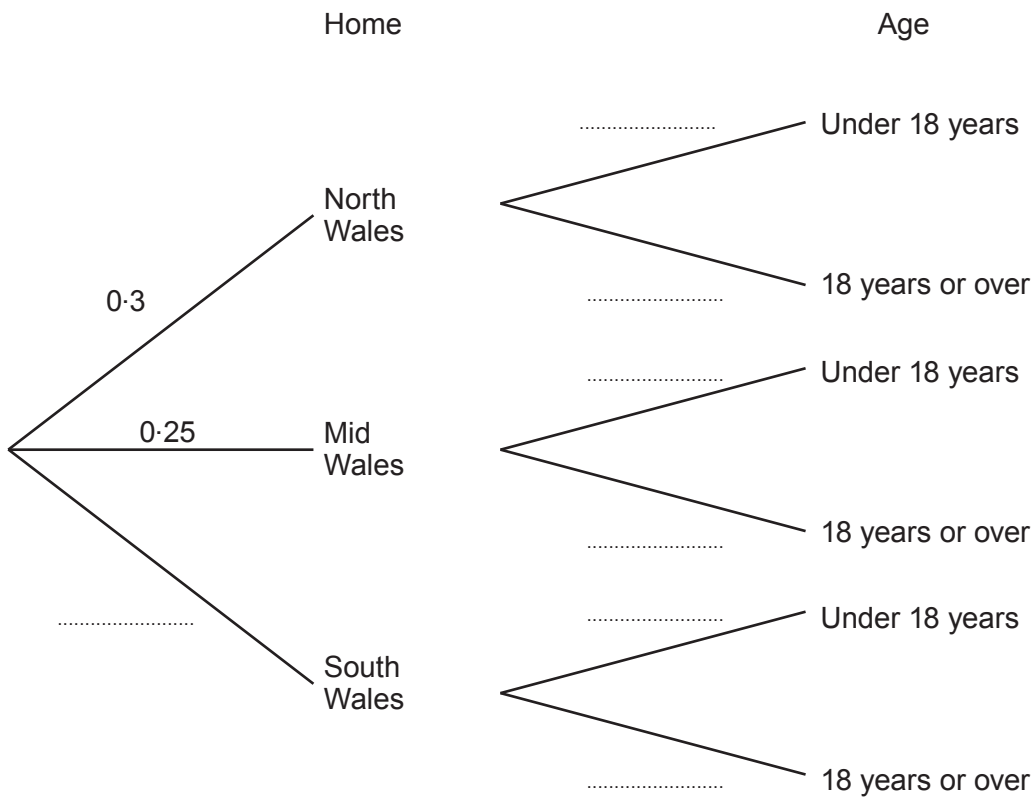
The people's ages are independent of where they live.

- (a) Complete the tree diagram shown below.

[3]

.....

.....



- (b) What is the probability of choosing a person who lives in South Wales and is under 18 years old?

[2]

.....

.....

.....

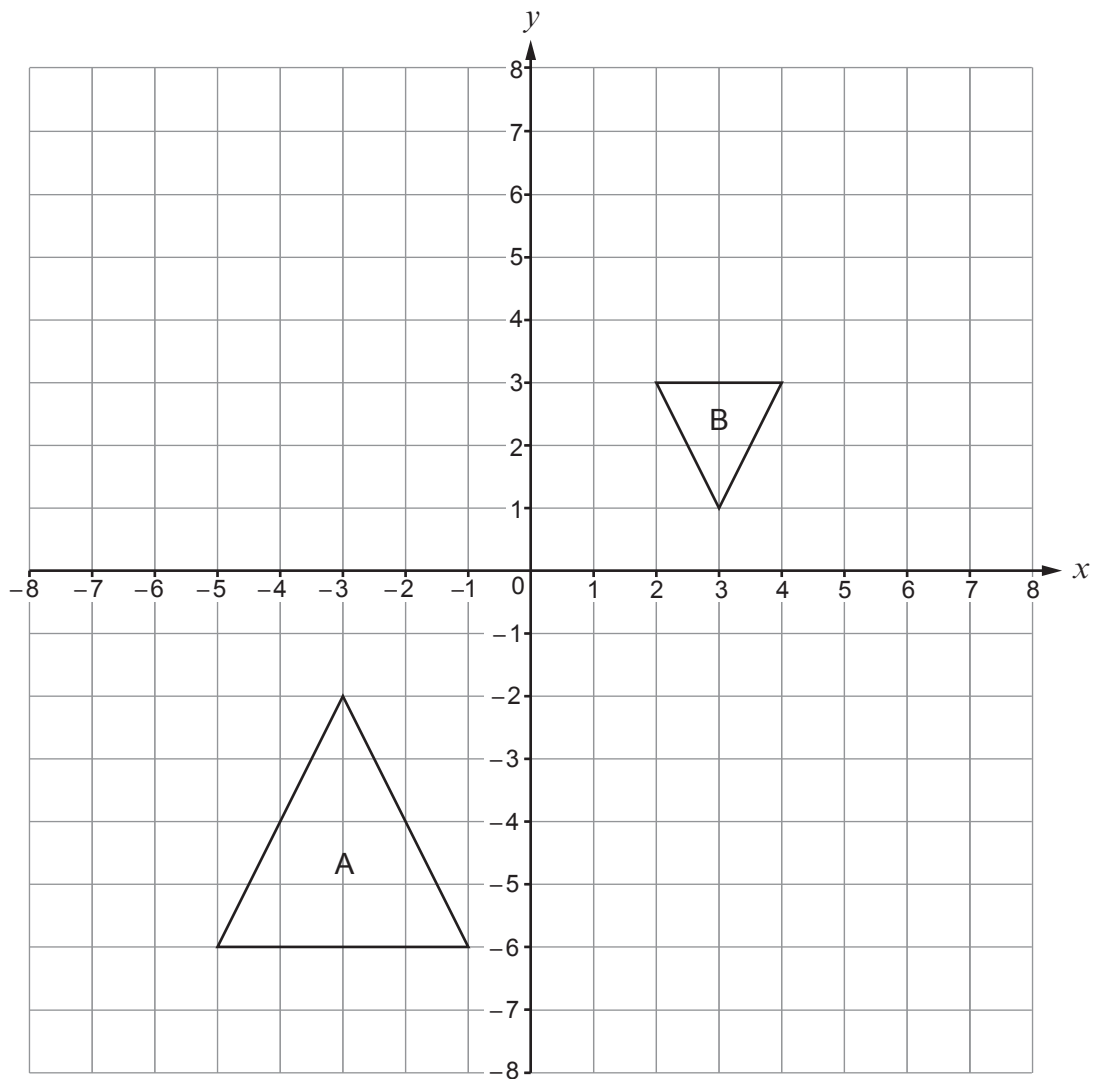






9. Describe fully the **single** transformation that transforms shape A onto shape B.

[3]



.....

.....

.....

.....

.....

.....

.....

.....

.....



10. Express  $\frac{5x}{2x-1} - \frac{4x}{4x+3}$  as a single fraction in its simplest form.

[4]

Examiner  
only

.....

.....

.....

.....

.....

.....

.....

.....

.....

.....

.....

.....

.....

.....

.....

.....

.....

.....

.....

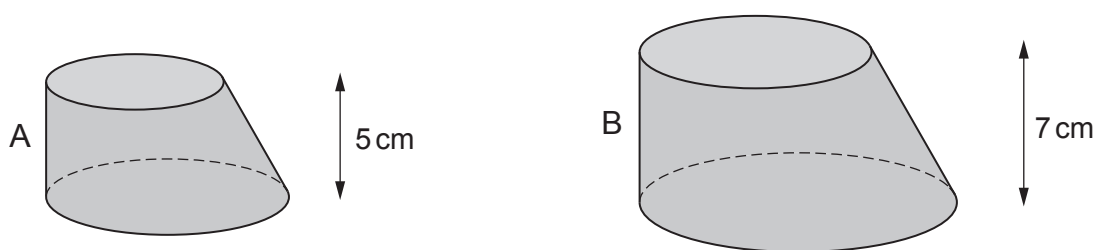
.....

.....

.....



11. Two **similar** solids are shown below.



*Diagrams not drawn to scale*

Solid A has a height of 5 cm.  
Solid B has a height of 7 cm.

Mari claims that the surface area of solid B is more than double the surface area of solid A.  
Is Mari correct?  
You must justify your answer.

[2]

.....

.....

.....

.....

.....

.....

.....

.....

.....

.....

.....

.....

.....

.....

.....

.....



12. Rearrange the following formula to make  $w$  the subject.

$$xw + 4 = 3y - 8w$$

[3]

.....

.....

.....

.....

.....

.....

.....

.....

.....

.....

.....











16. You are given that  $c = \sqrt{18}$ ,  $d = \sqrt{12}$  and  $e = \sqrt{3}$ .  
Circle the correct answer in each of the following:

(a)  $c$  is equal to

[1]

$2\sqrt{3}$

$3\sqrt{2}$

4.5

9

$9\sqrt{2}$

.....

.....

.....

(b)  $\frac{d}{e}$  is equal to

[1]

$\frac{1}{2}$

$\sqrt{2}$

2

$\sqrt{6}$

4

.....

.....

.....

(c)  $e^5$  is equal to

[1]

$\sqrt{15}$

5

$5\sqrt{3}$

$9\sqrt{3}$

15

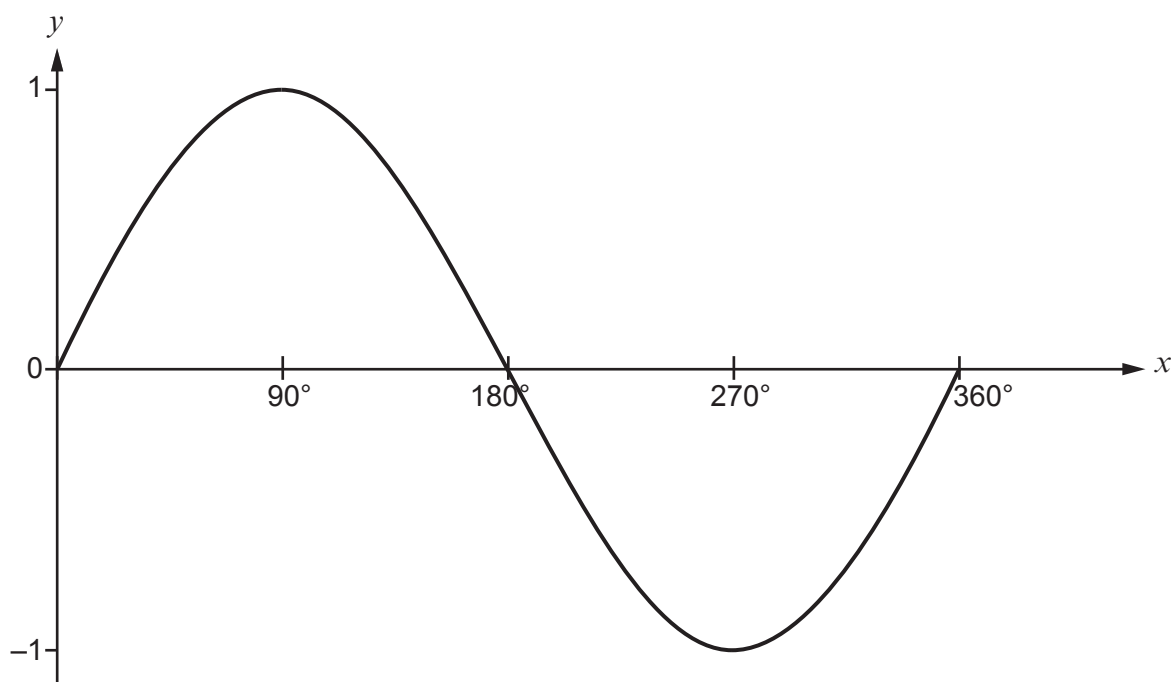
.....

.....

.....



17. The following diagram shows a sketch of  $y = \sin x$  for values of  $x$  from  $0^\circ$  to  $360^\circ$ .



Given that  $\sin 38^\circ = 0.6157$ , correct to 4 decimal places, write down all the solutions of the equation

$$\sin x = -0.6157$$

for values of  $x$  from  $0^\circ$  to  $360^\circ$ .

[2]

.....

.....

.....

.....

.....

.....

.....

.....

.....

.....



18.



Three of the seven cards shown above are selected at random, **without** being replaced.

- (a) Find the probability that the first card selected is a 3, the second is a 4 and the third is a 5. [2]

.....

.....

.....

.....

.....

- (b) Find the probability that the sum of the numbers selected is greater than 9. [3]

.....

.....

.....

.....

.....

.....

.....

.....

.....

.....

.....

.....

.....

.....

.....

.....

.....

.....

.....

.....

.....

.....

.....

**END OF PAPER**

