

Surname	Centre Number	Candidate Number
First name(s)		0



GCSE

3310U60-1



THURSDAY, 10 NOVEMBER 2022 – MORNING

**MATHEMATICS – NUMERACY
UNIT 2: CALCULATOR-ALLOWED
HIGHER TIER**

1 hour 45 minutes

ADDITIONAL MATERIALS

A calculator will be required for this examination.
A ruler, a protractor and a pair of compasses may be required.

INSTRUCTIONS TO CANDIDATES

Use black ink or black ball-point pen. Do not use gel pen or correction fluid.
You may use a pencil for graphs and diagrams only.
Write your name, centre number and candidate number in the spaces at the top of this page.
Answer **all** the questions in the spaces provided.
If you run out of space, use the additional page at the back of the booklet. Question numbers must be given for the work written on the additional page.
Take π as 3.14 or use the π button on your calculator.

For Examiner's use only		
Question	Maximum Mark	Mark Awarded
1.	9	
2.	12	
3.	13	
4.	8	
5.	6	
6.	7	
7.	13	
8.	12	
Total	80	

INFORMATION FOR CANDIDATES

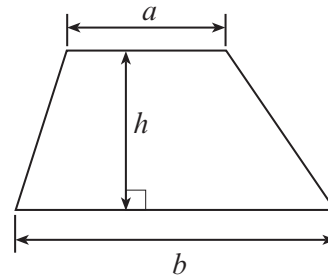
You should give details of your method of solution when appropriate.
Unless stated, diagrams are not drawn to scale.
Scale drawing solutions will not be acceptable where you are asked to calculate.
The number of marks is given in brackets at the end of each question or part-question.
In question 1, the assessment will take into account the quality of your linguistic and mathematical organisation, communication and accuracy in writing.



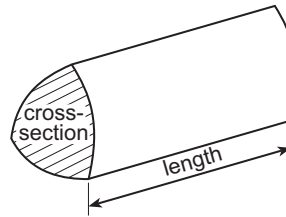
NOV223310U60101

Formula List – Higher Tier

Area of trapezium = $\frac{1}{2}(a + b)h$

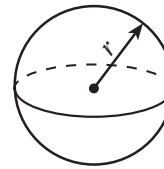


Volume of prism = area of cross-section \times length



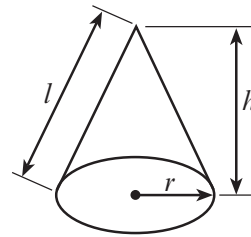
Volume of sphere = $\frac{4}{3}\pi r^3$

Surface area of sphere = $4\pi r^2$



Volume of cone = $\frac{1}{3}\pi r^2 h$

Curved surface area of cone = $\pi r l$

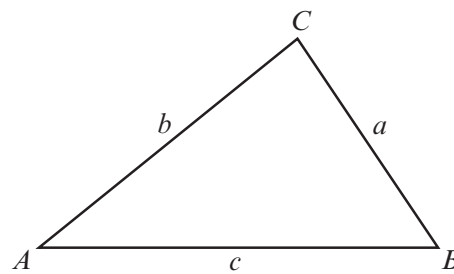


In any triangle ABC

Sine rule $\frac{a}{\sin A} = \frac{b}{\sin B} = \frac{c}{\sin C}$

Cosine rule $a^2 = b^2 + c^2 - 2bc \cos A$

Area of triangle = $\frac{1}{2} ab \sin C$



The Quadratic Equation

The solutions of $ax^2 + bx + c = 0$ where $a \neq 0$ are given by $x = \frac{-b \pm \sqrt{(b^2 - 4ac)}}{2a}$

Annual Equivalent Rate (AER)

AER, as a decimal, is calculated using the formula $\left(1 + \frac{i}{n}\right)^n - 1$, where i is the nominal interest rate per annum as a decimal and n is the number of compounding periods per annum.



2. Delyth and Ronnie are both students at the local college.

(a) Their houses and the college are all joined by straight roads, as shown in the diagram.

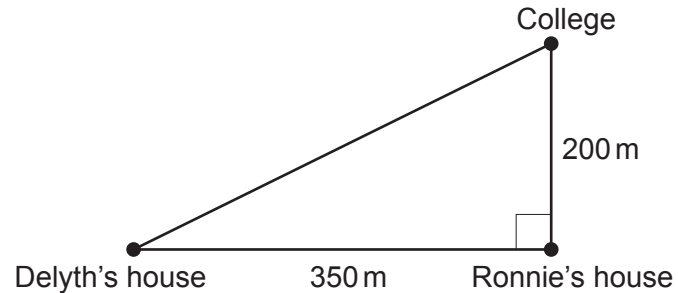


Diagram not drawn to scale

Delyth usually walks directly to college.

Calculate how much further Delyth has to walk if she passes Ronnie's house on her way to college. [5]

.....

.....

.....

.....

.....

.....

.....

.....

.....

.....



- (b) 35 students were asked how far they travelled to the college.
The results are recorded in the table below.

Distance, d (metres)	Frequency
$100 < d \leq 200$	9
$200 < d \leq 1000$	10
$1000 < d \leq 3000$	15
$3000 < d \leq 7000$	1

- (i) Ronnie is one of these 35 students.
He walks 200 m directly to college.

Does Ronnie travel further than the median distance travelled by these 35 students?

Yes No Can't tell

You must give a reason for your answer.

[1]

.....

.....

- (ii) Calculate an estimate of the mean distance these 35 students travelled to the college.

[4]

.....

.....

.....

.....

.....

.....

.....

.....

.....

Estimate of the mean distance travelled by these 35 students is m



- (c) There are 140 students who travel by bus to and from college.

Delyth wants to find out why these students do not walk to college.
She has decided to use a systematic sampling method to select 7 of these students to form a discussion group.

The names of all the 140 students are in a list.
Delyth has randomly selected the 2nd student in the list to join the discussion group.

Complete the table below to give the positions in the list of the 7 students selected to join the discussion group. [2]

.....

.....

.....

Student	1	2	3	4	5	6	7
Position in the list	2nd



3. (a) 10 years ago, Matteo bought a car for £4500.
 His car depreciated in value by 20% in the **first** year.
 In each of the following years, his car depreciated by 14% of its previous year's value.



Show that the value of Matteo's car is now less than £950.

You must show all your working.

[3]

.....

.....

.....

.....

.....

.....

.....

.....

.....

.....

- (b) Matteo's car insurance has increased by 25% from the amount he paid last year.
 His car insurance is £750 this year.

Calculate the amount Matteo paid for his car insurance last year.

[2]

.....

.....

.....

.....

.....

.....

.....

Matteo paid £ for his car insurance last year.

3310U601
07



- (d) The length of Matteo's car is 400 cm, correct to the **nearest 10 cm**.
The length of his garage is 550 cm, correct to the **nearest 10 cm**.

When Matteo parks his car, he leaves exactly 70 cm between the car and the back wall of the garage.

Calculate the maximum length of the space between Matteo's car and the garage door.
[3]

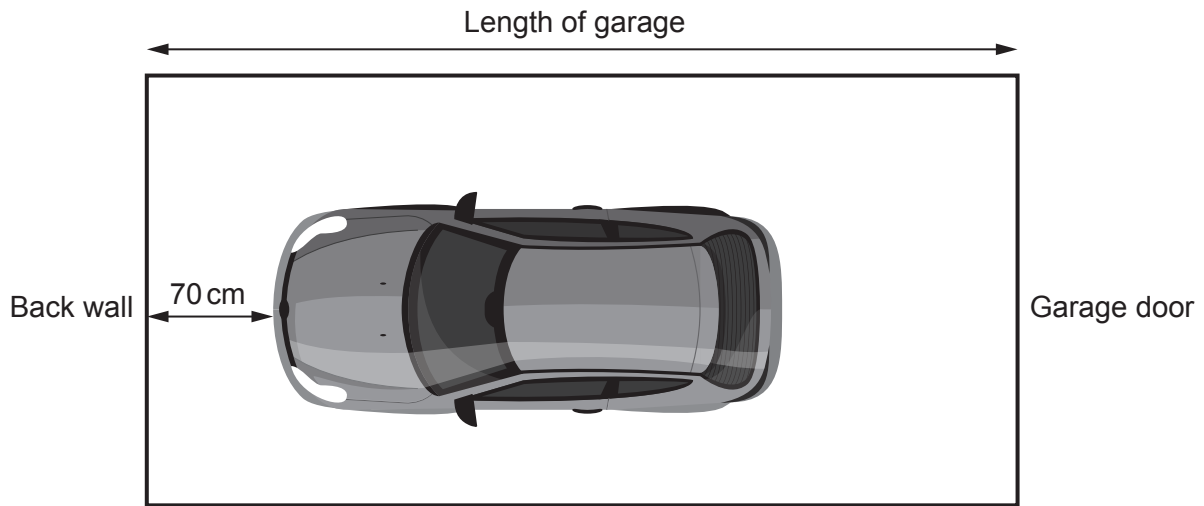


Diagram not drawn to scale

.....

.....

.....

.....

.....



4. (a) The population of Barbados in 1644 was said to be 30 000.

By 1964, the population of Barbados had increased by 682%.
From 1964 to 2014, the population of Barbados increased by a further 20%.



Calculate the population of Barbados in 2014.
You must show all your working.

[3]

.....

.....

.....

.....

.....

.....

- (b) The area of Barbados is 432 km^2 .
The population of Barbados in September 2019 was 287 106.

Calculate the population density of Barbados in September 2019.
Give your answer correct to 2 significant figures.

[3]

.....

.....

.....

.....

.....

- (c) The density of some of the sand in Barbados is 1442 kg/m^3 .
Express this density in g/cm^3 .

[2]

.....

.....

.....

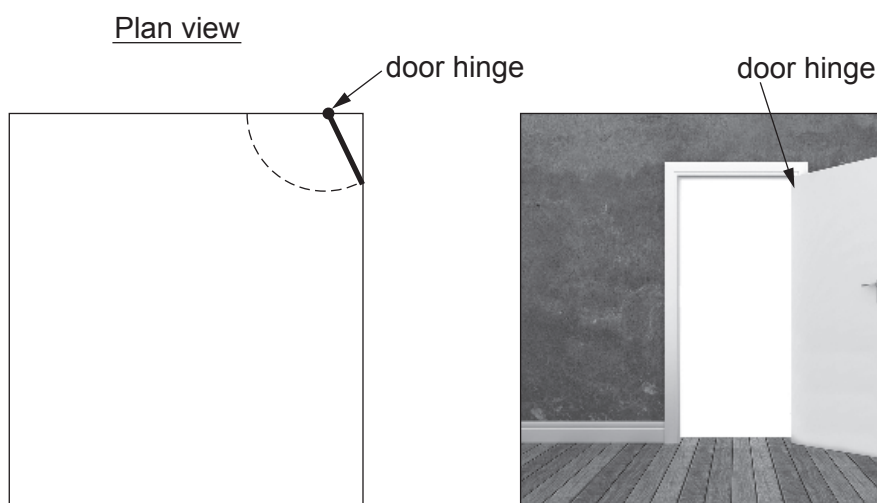


BLANK PAGE

**PLEASE DO NOT WRITE
ON THIS PAGE**



5. Gareth's living room is rectangular. It has a doorway close to one of the corners of the room.



Diagrams not drawn to scale

Gareth's living room door is 76 cm wide.
 The door hinge is 41 cm from the corner of the room.
 When the door is fully open, it touches the wall 64 cm from the corner.

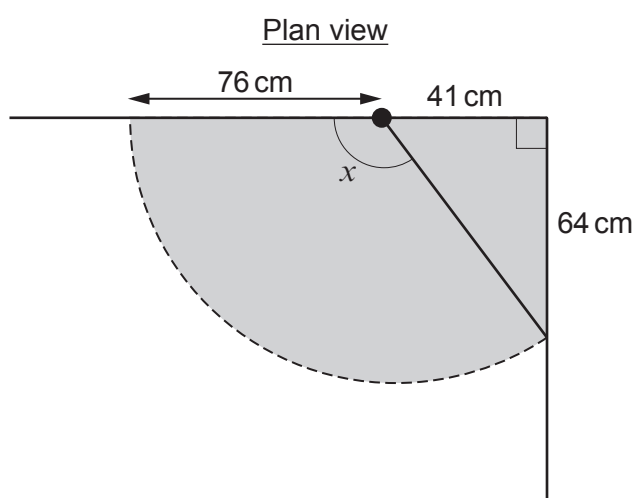


Diagram not drawn to scale

The shaded region in the diagram is an unusable part of his living room floor.



- (b) Calculate the AER for Rebecca's savings account.
Give your answer as a percentage, correct to 2 decimal places. [2]

.....

.....

.....

.....

.....

.....

.....

- (c) Rebecca's friend, Seren, opened a similar savings account with Dragon Building Society on 1st June 2020, depositing £300.
Seren then deposited £300 into the account on the 1st day of every month.
By 30th November 2021, Seren had £5636.84 in the account.

How much interest had Seren received?
Circle your answer.

[1]

£236.84

£636.84

£836.84

£3836.84

£4136.84

.....

.....

.....

.....



- (b) (i) A gift shop in Giza makes souvenir pyramids. They are based on the Great Pyramid. The shop paints all the faces of the souvenir pyramids. The base length of a souvenir pyramid is related to the total surface area to be painted by the formula:

$$b = \sqrt{\frac{A}{1 + \tan 58^\circ}}$$

where:

- b is the base length
- A is the total surface area to be painted.

Calculate the total surface area to be painted of a souvenir pyramid that has a base length of 12 cm. [3]

.....

.....

.....

.....

.....

- (ii) The Sphinx is another ancient monument that sits next to the Great Pyramid. The shop sells two sizes of Sphinx souvenirs that are mathematically similar.



Diagrams not drawn to scale

The small souvenir has a length of 15 cm and a total surface area to be painted of 400 cm^2 . The large souvenir has a length of 31.5 cm. Calculate the total surface area to be painted of the large souvenir. [3]

.....

.....

.....

.....

.....



