

Please write clearly in block capitals.

Centre number

--	--	--	--	--

Candidate number

--	--	--	--

Surname

---

Forename(s)

---

Candidate signature

---

I declare this is my own work.

# GCSE COMBINED SCIENCE: SYNERGY

# H

Higher Tier Paper 1 Life and Environmental Sciences

Tuesday 12 May 2020

Afternoon

Time allowed: 1 hour 45 minutes

## Materials

For this paper you must have:

- a ruler
- a protractor
- a scientific calculator
- the periodic table (enclosed)
- the Physics Equations Sheet (enclosed).

## Instructions

- Use black ink or black ball-point pen.
- Pencil should only be used for drawing.
- Fill in the boxes at the top of this page.
- Answer **all** questions in the spaces provided. Do not write outside the box around each page or on blank pages.
- If you need extra space for your answer(s), use the lined pages at the end of this book. Write the question number against your answer(s).
- Do all rough work in this book. Cross through any work you do not want to be marked.
- In all calculations, show clearly how you work out your answer.

## Information

- The maximum mark for this paper is 100.
- The marks for questions are shown in brackets.
- You are expected to use a calculator where appropriate.
- You are reminded of the need for good English and clear presentation in your answers.

For Examiner's Use	
Question	Mark
1	
2	
3	
4	
5	
6	
7	
8	
9	
10	
<b>TOTAL</b>	



0 1

*Escherichia coli* (*E. coli*) is a species of bacteria that can cause food poisoning.

0 1 . 1

Which term describes *E. coli* cells?

[1 mark]

Tick (✓) **one** box.

Algal cells

Fungal cells

Prokaryotic cells

Some strains of *E. coli* are resistant to antibiotics.

**Table 1** shows the number of infections caused by antibiotic resistant *E. coli*.

**Table 1**

Year	Number of infections
2014	9 000
2015	10 800
2016	11 400
2017	12 100
2018	13 500



**0 1 . 2** Calculate the percentage increase in the number of infections caused by antibiotic resistant *E. coli* between 2014 and 2018.

Use the equation:

$$\text{percentage increase} = \frac{\text{number of infections in 2018} - \text{number of infections in 2014}}{\text{number of infections in 2014}} \times 100$$

**[2 marks]**

---



---



---



---

Percentage increase = \_\_\_\_\_ %

Antibiotics are used to treat many different bacterial infections.

The government wants scientists to research and develop a new 'antibiotic test' that:

- takes less than 30 minutes
- shows doctors if an antibiotic is needed for an infection
- shows doctors which antibiotic to use.

**0 1 . 3** Suggest **two** reasons why research into antibiotics is needed.

**[2 marks]**

1 \_\_\_\_\_

---

2 \_\_\_\_\_

---

**Question 1 continues on the next page**

**Turn over ►**



0 1 . 4 The new test should mean that fewer people take antibiotics.

What are **two** effects of fewer people taking antibiotics?

[2 marks]

Tick (✓) **two** boxes.

Antibiotic resistant bacteria are less likely to evolve.

Bacteria will be killed by all types of antibiotic.

Fewer bacteria will be exposed to antibiotics.

Fungi and viruses will **not** be killed by antibiotics.

Natural selection in bacteria will be faster.

0 1 . 5 A vaccine against *E. coli* is being trialled.

Suggest what this vaccine contains to cause immunity to *E. coli*.

[1 mark]

---

8



**0 2**

This question is about solids and liquids.

**0 2 . 1**

Describe **two** ways the arrangement of particles in a solid is different from the arrangement of particles in a liquid.

You should answer in terms of the particle model.

**[2 marks]**

1 \_\_\_\_\_

\_\_\_\_\_

2 \_\_\_\_\_

\_\_\_\_\_

Liquid water can freeze to form solid ice.

Grit is spread on roads to reduce the formation of ice.

Grit contains a mixture of salt and sand.

**0 2 . 2**

Explain why less ice is formed when salt is spread on roads.

**[2 marks]**

\_\_\_\_\_

\_\_\_\_\_

\_\_\_\_\_

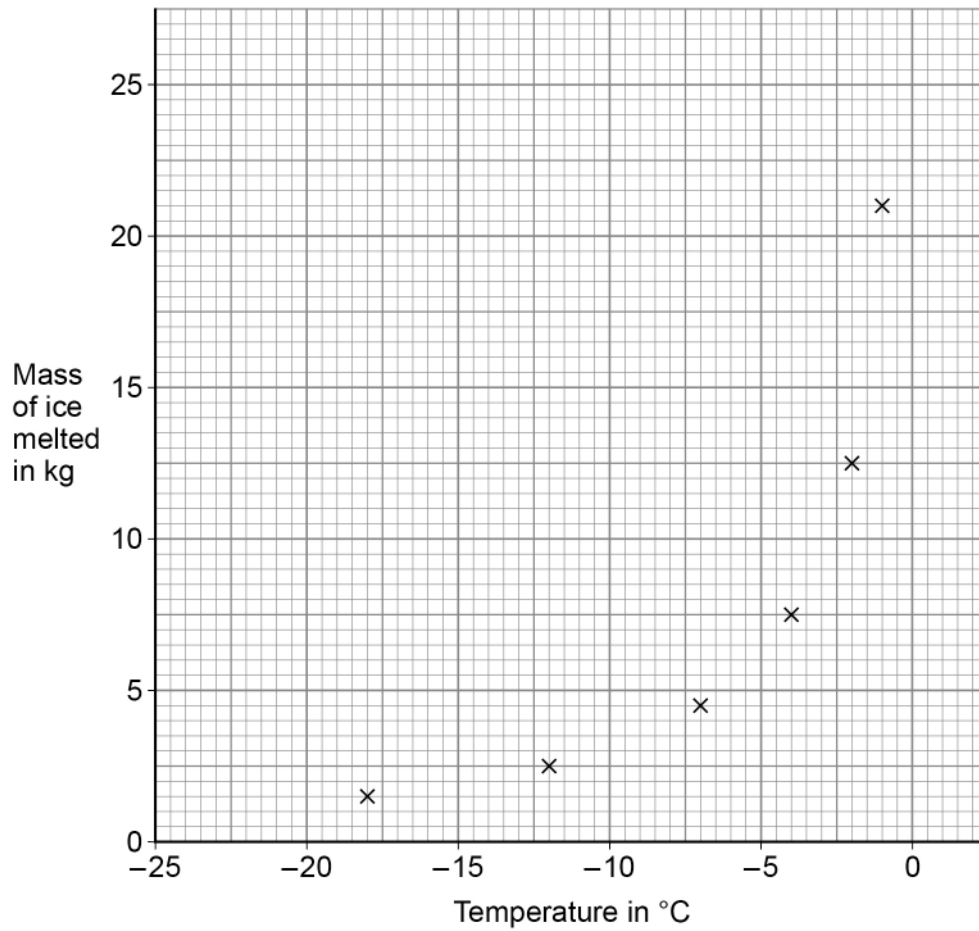
\_\_\_\_\_

**Question 2 continues on the next page**

**Turn over ►**

**Figure 1** shows the mass of ice melted by 1 kg of grit at different temperatures.

**Figure 1**



**0 2 . 3** Draw a line of best fit on **Figure 1**.

[1 mark]

**0 2 . 4** Predict the mass of ice that 1 kg of grit would melt at  $-20\text{ }^{\circ}\text{C}$

Use **Figure 1**.

[1 mark]

Mass of ice = \_\_\_\_\_ kg



0 2 . 5

Describe the effect of changing temperature on the mass of ice that 1 kg of grit can melt.

Use **Figure 1**.

[2 marks]

---

---

---

---

0 2 . 6

Grit is spread on roads when low temperatures are expected.

Some roads are built with temperature sensors in the surface.

The sensors indicate when to spread grit on the roads.

Suggest **one** advantage of having temperature sensors in roads rather than relying on weather forecasts.

[1 mark]

---

---

9

**Turn over for the next question**

**Turn over ►**



**There are no questions printed on this page**

*Do not write  
outside the  
box*

**DO NOT WRITE ON THIS PAGE  
ANSWER IN THE SPACES PROVIDED**





0 3

Sewers are often blocked by 'fatbergs'.

Fatbergs are made of very large lumps of fat and other solids.

The fat and solids come from waste being washed down drains and flushed down toilets.

**Figure 2** shows a person holding a small fatberg.

**Figure 2**



0 3 . 1

The chemical composition of fatbergs can be tested.

Describe how a sample from a fatberg could be tested for fat and for protein.

**[4 marks]**

Test for fat \_\_\_\_\_

\_\_\_\_\_

Positive result for fat \_\_\_\_\_

Test for protein \_\_\_\_\_

\_\_\_\_\_

Positive result for protein \_\_\_\_\_

**Question 3 continues on the next page**

**Turn over ►**



**0 3 . 2** Some fats in fatbergs come from undigested food in faeces.

Most fat that humans eat is digested.

Give the **two** products of fat digestion.

**[2 marks]**

1 \_\_\_\_\_

2 \_\_\_\_\_

It may be possible to use fatbergs as a fuel in power stations.

**0 3 . 3** Burning 1.0 kg of fatbergs transfers 40 MJ of energy.

A power station could burn 1250 kg of fatbergs each hour.

Calculate the energy output from the power station in 1 year.

1 year = 8760 hours

**[3 marks]**

---

---

---

---

---

---

---

Energy output in 1 year = \_\_\_\_\_ MJ



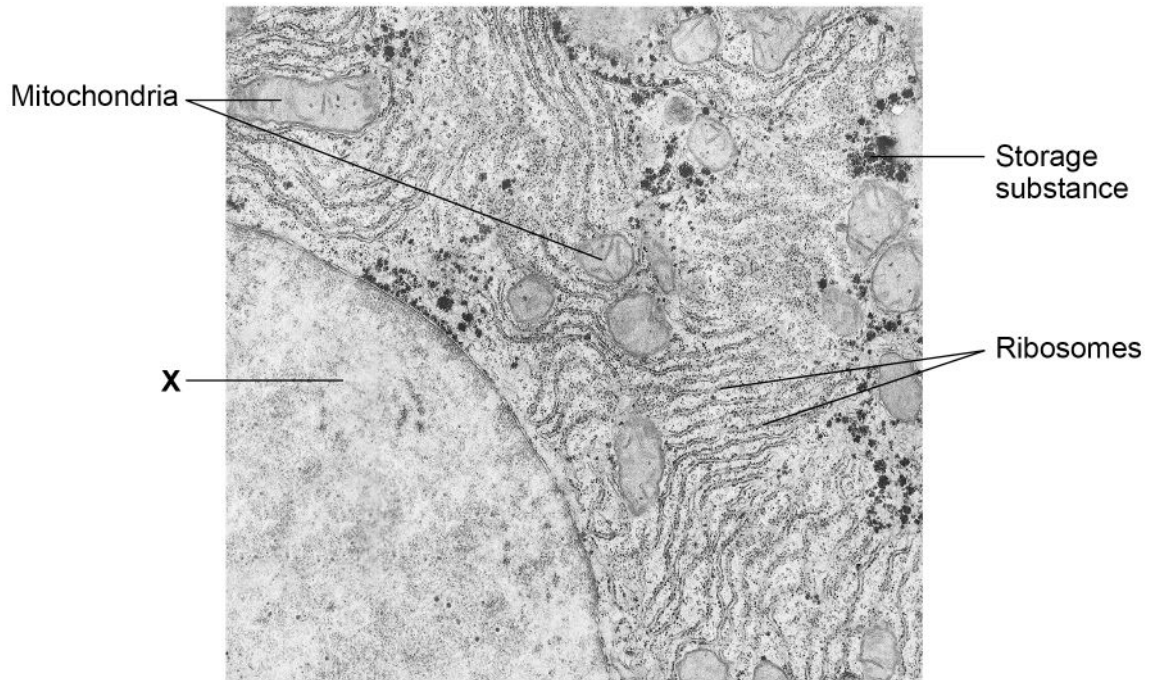


0	4
---	---

**Figure 3** shows part of one liver cell.

The photograph was taken with an electron microscope.

**Figure 3**



0	4	.	1
---	---	---	---

Name structure **X**.

**[1 mark]**

---



0 4 . 2

Describe the function of mitochondria.

[3 marks]

---

---

---

---

---

---

---

---

0 4 . 3

Protein synthesis occurs at ribosomes.

Describe the structure of a protein molecule.

[2 marks]

---

---

---

---

0 4 . 4

The storage substance in liver cells is a carbohydrate.

Name the carbohydrate storage substance found in liver cells.

[1 mark]

---

Question 4 continues on the next page

Turn over ►



Electron microscopes have higher resolving power than light microscopes.

**0 4 . 5** What is the resolving power of a microscope?

**[1 mark]**

Tick (✓) **one** box.

How far the focusing knob has to be adjusted to form a clear image

The number of times larger than real life the image appears

The shortest distance between two points that can be seen as separate points

**0 4 . 6** An electron microscope has a magnification of  $\times 650\,000$

The length of a cell structure in an image from the electron microscope was 27 mm

Calculate the real length of this cell structure in mm

Give your answer to 2 significant figures.

**[4 marks]**

---



---



---



---



---



---



---



---

Real length of cell structure (2 significant figures) = \_\_\_\_\_ mm

**12**



**0 5**

The electromagnetic spectrum is made up of waves with different wavelengths and frequencies.

**0 5 . 1**

Give the type of electromagnetic wave with the lowest frequency.

**[1 mark]**

---

**0 5 . 2**

A wave has a wavelength of 2.5 km and a velocity of 300 000 000 m/s

Calculate the frequency of the wave.

**[4 marks]**

---

---

---

---

---

---

---

Frequency = \_\_\_\_\_ Hz

**Question 5 continues on the next page**

**Turn over ►**

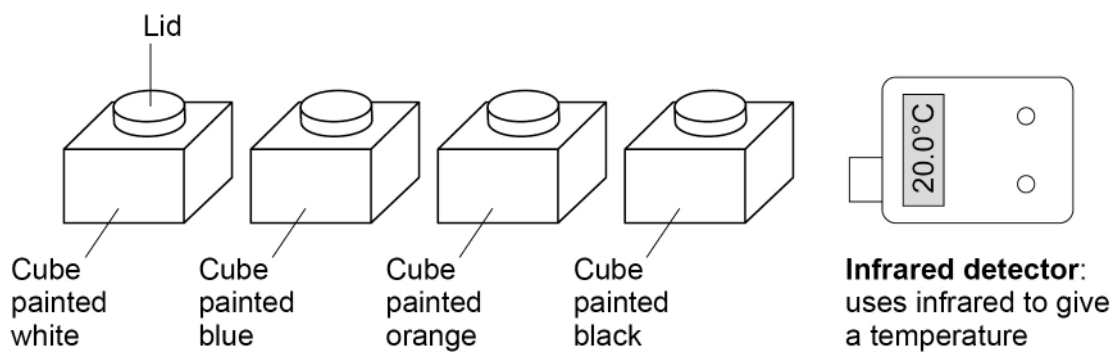
0 5 . 3

**Figure 4** shows equipment that is used to investigate the emission of infrared radiation from different colours of surface.

The four hollow metal cubes are each painted a different colour.

The cubes can be filled with hot water before the lid is put on.

**Figure 4**



Describe a method to investigate which colour of surface emits infrared radiation at the greatest rate.

**[4 marks]**

---

---

---

---

---

---

---

---

---

---

---

---

---

---

---

---





**0 5 . 4** Which colour of surface will emit infrared radiation at the greatest rate?

**[1 mark]**

Tick (✓) **one** box.

Black

Blue

Orange

White

**0 5 . 5** It is important to identify people at airports who may have infectious diseases, such as measles.

Explain how cameras that detect the rate of infrared emission can identify people with infectious diseases such as measles.

**[2 marks]**

---

---

---

---

12

**Turn over for the next question**

**Turn over ►**



**0 6**

Plant leaves contain chlorophyll.

Nitrate ions are needed to produce chlorophyll.

**0 6 . 1**Name **one** other mineral ion needed to produce chlorophyll.Do **not** refer to nitrate in your answer.**[1 mark]**

---

**0 6 . 2**

Some mineral ions are in a lower concentration in the soil compared with inside plant root hair cells.

Name the process that moves mineral ions from a lower concentration in the soil into plant root hair cells.

**[1 mark]**

---

**0 6 . 3**

Explain how mineral ions move from root hair cells to the leaves.

**[4 marks]**

---

---

---

---

---

---

---

---



0 6 . 4

Which **two** factors increase the rate of movement of mineral ions through the plant?**[2 marks]**Tick (✓) **two** boxes.

A decrease in the amount of water in the soil

A decrease in the concentration of water vapour in the air

A decrease in the wind speed of the air around the leaves

An increase in light intensity causing guard cells to curve more

An increase in the humidity of the air around the stomata

---

8**Turn over for the next question****Turn over ►**

07

Cystic fibrosis is an inherited condition.

The allele for having cystic fibrosis is recessive, **r**.

The dominant allele is **R**.

A person who has the genotype **Rr** is a 'carrier' of cystic fibrosis.

07.1

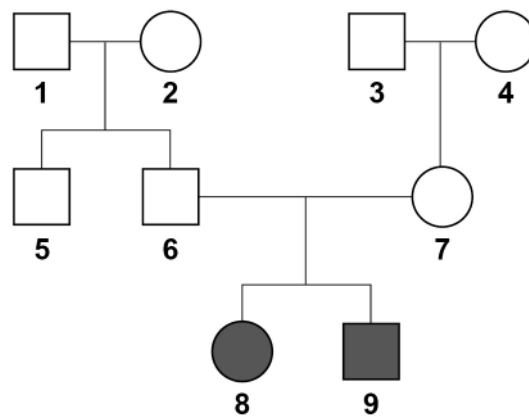
Carriers do **not** have symptoms of cystic fibrosis.

What scientific term describes the carrier's genotype, **Rr**?

[1 mark]

**Figure 5** shows the inheritance of cystic fibrosis in one family.

**Figure 5**



**Key**

○ Female who does **not** have cystic fibrosis

● Female who has cystic fibrosis

□ Male who does **not** have cystic fibrosis

■ Male who has cystic fibrosis



**0 7 . 2** Person **6** and person **7** plan to have another child.

Draw a Punnett square diagram to show the probability of the child having cystic fibrosis.

Identify the genotypes of any offspring with cystic fibrosis.

Use **Figure 5**.

**[5 marks]**

Probability of the child having cystic fibrosis = \_\_\_\_\_

**Question 7 continues on the next page**

**Turn over ►**



0 7 . 3

Mucus is produced in the breathing system.

In people with cystic fibrosis the mucus is thicker than the mucus produced in an unaffected person.

Explain why a person with cystic fibrosis has an increased risk of lung infections.

**[4 marks]**

---

---

---

---

---

---

---

---

---

---



Some medical products are produced by genetically modified (GM) organisms.

**0 7 . 4** Hamsters are small mammals.

GM hamster cells are used to produce drugs to treat some human genetic disorders.

Describe how a human allele can be transferred into the genome of a hamster cell.

**[2 marks]**

---

---

---

---

**0 7 . 5** Name a medical product that can be produced by GM bacteria.

Give the name of the disorder the product is used to treat.

**[2 marks]**

Medical product \_\_\_\_\_

Disorder \_\_\_\_\_

14

**Turn over for the next question**

**Turn over ►**

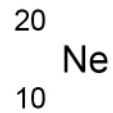


0 8

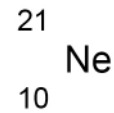
**Figure 6** shows two isotopes of neon.

**Figure 6**

**Neon-20**



**Neon-21**



0 8 . 1

Compare the number of sub-atomic particles in an atom of neon-20 and an atom of neon-21

**[2 marks]**

---



---



---



---

0 8 . 2

There are 18 neon atoms in every million particles of air.

Of these 18 neon atoms, 0.27% are neon-21 atoms.

Calculate the percentage of particles in air that are neon-21 atoms.

**[2 marks]**

---



---



---



---



---

Percentage = \_\_\_\_\_ %





**0 8 . 3** **Figure 7** shows a sign containing neon.

The sign is connected to an electrical supply.

**Figure 7**



The neon atoms gain energy when the sign is switched on.

Explain why the sign glows when the electrical supply is switched on.

**[4 marks]**

---

---

---

---

---

---

---

---

---

---

**8**

**Turn over for the next question**

**Turn over ►**



**0 9**

HIV infection can prevent the body's immune system from destroying pathogens.

**0 9 . 1**

Explain the roles of white blood cells when a pathogen enters the body.

**[6 marks]**

---

---

---

---

---

---

---

---

---

---

---

---

---

---

---

---

---

---

---

---

---

---

---



0 9 . 2

Name the type of drug that can be used to treat HIV.

[1 mark]

---

0 9 . 3

Describe how AIDS is different from HIV infection.

[1 mark]

---

---

---

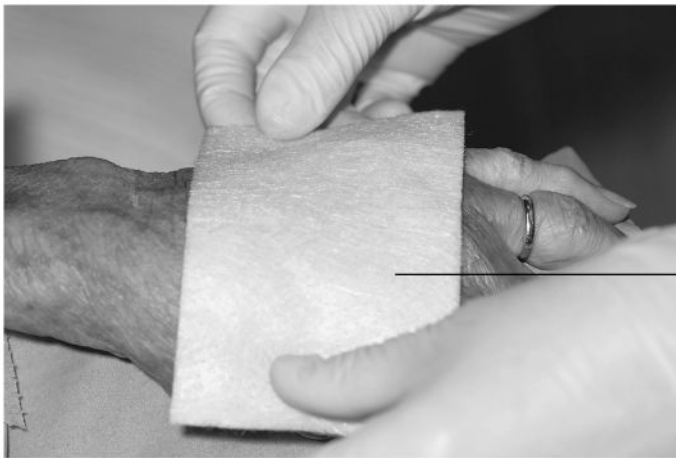
---

  
8**Turn over for the next question****Turn over ►**

1 0

**Figure 8** shows a wound dressing put over a cut on a person's hand.

**Figure 8**



Wound dressing

'Smart' wound dressings contain tiny electronics and sensors.

Smart dressings constantly monitor the wound to show if the wound is infected.

The information from the smart dressing can be sent wirelessly to the mobile phones of the patient and their doctor.

Smart dressings can release antibiotics if needed.

Evaluate the use of smart dressings compared with the use of the wound dressing shown in **Figure 8**.

**[6 marks]**

---

---

---

---

---

---

---

---

---

---



---

---

---

---

---

---

---

---

---

---

---

---

---

---

---

---

**6**

**END OF QUESTIONS**



**There are no questions printed on this page**

*Do not write  
outside the  
box*

**DO NOT WRITE ON THIS PAGE  
ANSWER IN THE SPACES PROVIDED**





Do not write  
outside the  
box

Question number	<b>Additional page, if required.</b> <b>Write the question numbers in the left-hand margin.</b>
	<p>.....</p> <p>.....</p> <p>.....</p> <p>.....</p> <p>.....</p> <p>.....</p> <p>.....</p> <p>.....</p> <p>.....</p> <p>.....</p> <p>.....</p> <p>.....</p> <p>.....</p> <p>.....</p> <p>.....</p> <p>.....</p> <p>.....</p> <p>.....</p> <p>.....</p> <p>.....</p> <p>.....</p> <p>.....</p> <p>.....</p> <p>.....</p>
	<p><b>Copyright information</b></p> <p>For confidentiality purposes, all acknowledgements of third-party copyright material are published in a separate booklet. This booklet is published after each live examination series and is available for free download from <a href="http://www.aqa.org.uk">www.aqa.org.uk</a>.</p> <p>Permission to reproduce all copyright material has been applied for. In some cases, efforts to contact copyright-holders may have been unsuccessful and AQA will be happy to rectify any omissions of acknowledgements. If you have any queries please contact the Copyright Team.</p> <p>Copyright © 2020 AQA and its licensors. All rights reserved.</p>

