

Please write clearly in block capitals.

Centre number

Candidate number

Surname _____

Forename(s) _____

Candidate signature _____

I declare this is my own work.

A-level PHYSICS

Paper 3 Section B Astrophysics

Time allowed: The total time for both sections of this paper is 2 hours. You are advised to spend approximately 50 minutes on this section.

Materials

For this paper you must have:

- a pencil and a ruler
- a scientific calculator
- a Data and Formulae Booklet
- a protractor.

Instructions

- Use black ink or black ball-point pen.
- Fill in the boxes at the top of this page.
- Answer **all** questions.
- You must answer the questions in the spaces provided. Do not write outside the box around each page or on blank pages.
- If you need extra space for your answer(s), use the lined pages at the end of this book. Write the question number against your answer(s).
- Do all rough work in this book. Cross through any work you do not want to be marked.
- Show all your working.

Information

- The marks for questions are shown in brackets.
- The maximum mark for this paper is 35.
- You are expected to use a scientific calculator where appropriate.
- A Data and Formulae Booklet is provided as a loose insert.

For Examiner's Use	
Question	Mark
1	
2	
3	
4	
5	
TOTAL	



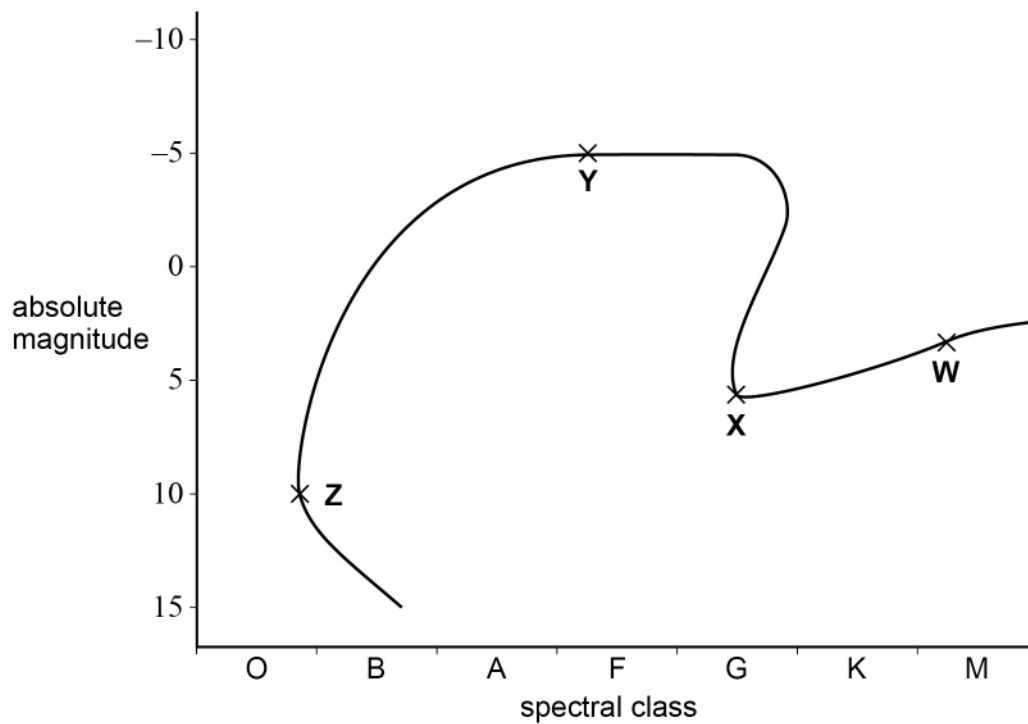
Section B

Answer **all** questions in this section.

0 1

Figure 1 shows the evolution of a star similar to the Sun on a Hertzsprung-Russell (HR) diagram.

Figure 1



0 1 . 1

State the evolutionary stage of the star at each of the points **W**, **X**, **Y** and **Z**.

[3 marks]

W _____

X _____

Y _____

Z _____

Theta Carinae is a star with a radius five times that of the Sun. It has a surface temperature of 31 000 K.

0 1 . 2

Annotate **Figure 1** with a **T** to show the position of Theta Carinae.

[1 mark]



An astronomer suggests that an Earth-sized planet orbits Theta Carinae.

0 1 . 3

Explain **one** difficulty with using the transit method to detect this planet.

[2 marks]

0 1 . 4

The astronomer suggests that the Earth-sized planet receives a similar amount of power from Theta Carinae as the Earth does from the Sun.

The average power output of the Sun is 3.8×10^{26} W.

Determine the orbital radius of the Earth-sized planet orbiting Theta Carinae.

[5 marks]

orbital radius = _____ m

11

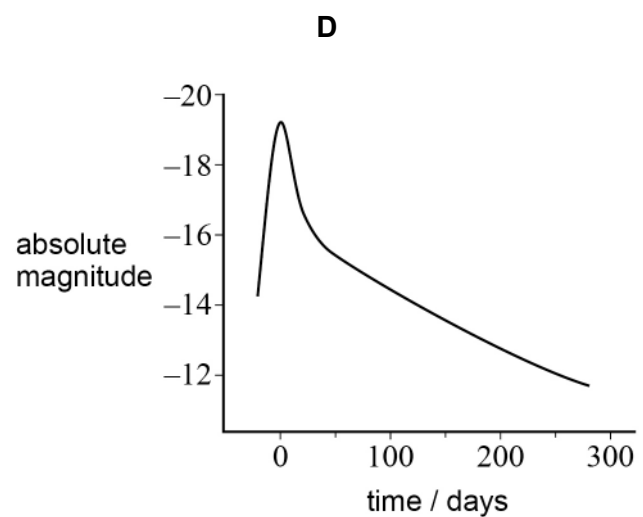
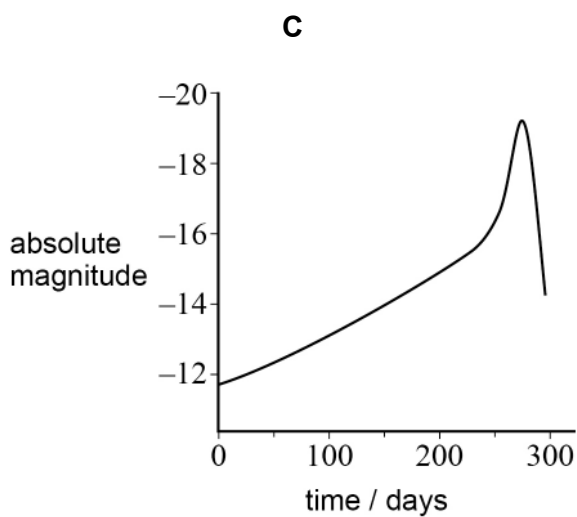
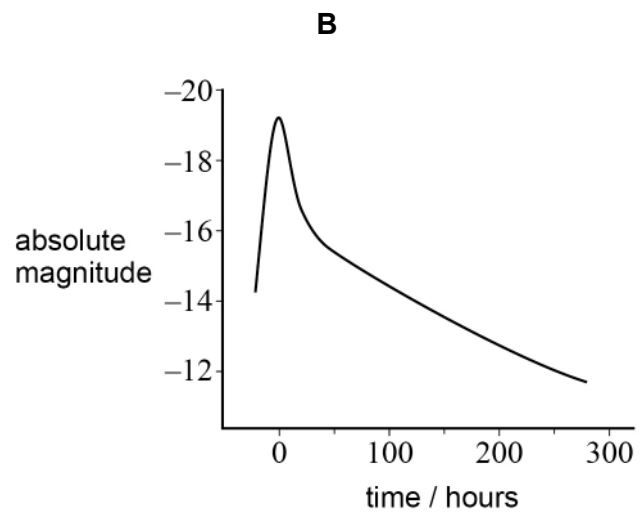
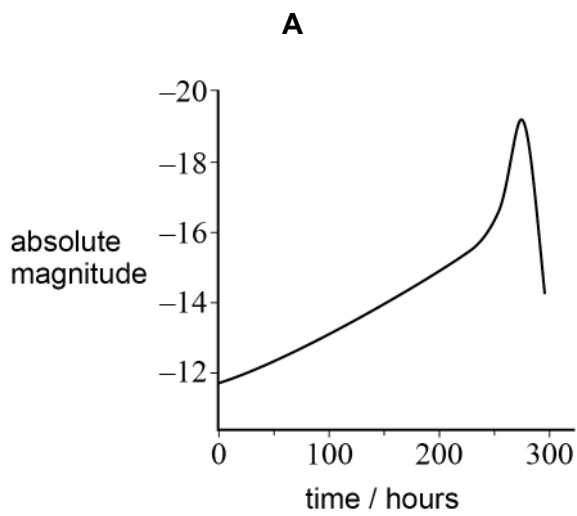
Turn over ►



0 2 . 1 Which graph shows the light curve for a typical type 1a supernova?

Tick (✓) **one** box.

[1 mark]



- A**
- B**
- C**
- D**



0	2	.	2
---	---	---	---

The Andromeda galaxy is approximately 7.7×10^5 pc from Earth.

Deduce whether a type 1a supernova which occurred in Andromeda can be observed from Earth with the naked eye.

[3 marks]

—
4

Turn over for the next question

Turn over ►

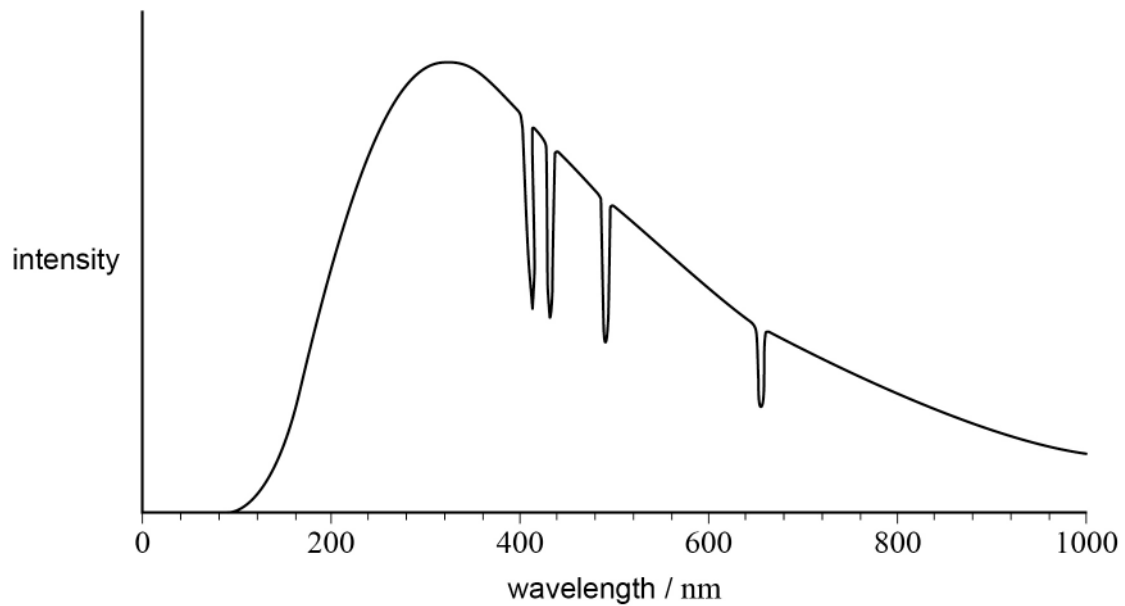


0 3

Miaplacidus and Avior are two stars in the constellation Carina.
Miaplacidus is a class A star.
Avior is a class K star.

Figure 2 shows how the intensity of radiation arriving at the Earth varies with wavelength for **one** of these stars. Only the important features of the variation are shown.

Figure 2



Deduce, with reference to **Figure 2**, the identity of the star.

In your answer you should:

- explain the overall shape of the graph
- describe the processes in the star that lead to the decreases in intensity
- state the identity of the star.

[6 marks]



0 4

IC2497 is a galaxy that contained a quasar. It is believed that the quasar stopped emitting radiation several thousand years ago.

0 4 . 1

Suggest why the quasar stopped emitting radiation.

[2 marks]

0 4 . 2

IC2497 has a red shift of 0.0516

Determine the distance from the Earth to IC2497.
Give an appropriate unit for your answer.

[4 marks]

distance = _____ unit = _____

6

0 5 . 1 Explain what is meant by the Rayleigh criterion.

[2 marks]

0 5 . 2 A telescope uses wavelengths in the range 90 nm to 120 nm.

Explain why this telescope must be located in space.

Go on to discuss **one** advantage that this telescope has compared to a telescope with the same aperture that uses visible light.

[3 marks]

Question 5 continues on the next page

Turn over ►



0 5 . 3 **Table 1** shows information about two telescopes.

Table 1

Telescope	Diameter / m	Dish shape
Arecibo	305	spherical
Lovell	76	parabolic

Each telescope detects radio waves with a wavelength of 21 cm.

Compare the performances of the telescopes in **Table 1** when both are used to observe the same faint radio objects.

[3 marks]

8

END OF QUESTIONS



There are no questions printed on this page

*Do not write
outside the
box*

**DO NOT WRITE ON THIS PAGE
ANSWER IN THE SPACES PROVIDED**



There are no questions printed on this page

*Do not write
outside the
box*

**DO NOT WRITE ON THIS PAGE
ANSWER IN THE SPACES PROVIDED**

Copyright information

For confidentiality purposes, all acknowledgements of third-party copyright material are published in a separate booklet. This booklet is published after each live examination series and is available for free download from www.aqa.org.uk.

Permission to reproduce all copyright material has been applied for. In some cases, efforts to contact copyright-holders may have been unsuccessful and AQA will be happy to rectify any omissions of acknowledgements. If you have any queries please contact the Copyright Team.

Copyright © 2021 AQA and its licensors. All rights reserved.



1 6



2 1 6 A 7 4 0 8 / 3 B A

IB/M/Jun21/7408/3BA